

# National Testing Agency

<b>Question Paper Name :</b>	General Eng 24th June 2023 Shift 2
<b>Subject Name :</b>	General Eng
<b>Creation Date :</b>	2023-06-24 20:22:17
<b>Duration :</b>	120
<b>Total Marks :</b>	400
<b>Display Marks:</b>	Yes

## General

<b>Group Number :</b>	1
<b>Group Id :</b>	920906224
<b>Group Maximum Duration :</b>	0
<b>Group Minimum Duration :</b>	120
<b>Show Attended Group? :</b>	No
<b>Edit Attended Group? :</b>	No
<b>Break time :</b>	0
<b>Group Marks :</b>	400
<b>Is this Group for Examiner? :</b>	No
<b>Examiner permission :</b>	Cant View
<b>Show Progress Bar? :</b>	No

## Part A

<b>Section Id :</b>	920906447
<b>Section Number :</b>	1
<b>Section type :</b>	Online
<b>Mandatory or Optional :</b>	Mandatory
<b>Number of Questions :</b>	17
<b>Number of Questions to be attempted :</b>	17
<b>Section Marks :</b>	80
<b>Enable Mark as Answered Mark for Review and Clear Response :</b>	Yes
<b>Maximum Instruction Time :</b>	0
<b>Sub-Section Number :</b>	1
<b>Sub-Section Id :</b>	920906721
<b>Question Shuffling Allowed :</b>	Yes
<b>Is Section Default? :</b>	null

**Question Number : 1 Question Id : 92090622570 Question Type : MCQ Option Shuffling : No Is Question Mandatory : No Calculator : None Response Time : N.A Think Time : N.A Minimum Instruction Time : 0**

**Correct Marks : 4 Wrong Marks : 1**

Match List I with List II.

Fill in the blanks in list I with appropriate phrasal verbs in list II

- | List I   | List II        |
|--|----------------|
| (A) My Japanese isn't very good but it is enough to_____.                | (I) drop out   |
| (B) I ran in a Marathon last week but I had to_____ after 15 kilometers. | (II) show up   |
| (C) I had gone to meet my friend but she didn't_____.                    | (III) look out |
| (D) I request you to_____ for my sister when I am away.                  | (IV) get by    |

Choose the correct answer from the options given below :

- (1) (A)-(II), (B)-(IV), (C)-(III), (D)-(I)
- (2) (A)-(II), (B)-(III), (C)-(I), (D)-(IV)
- (3) (A)-(IV), (B)-(I), (C)-(II), (D)-(III)
- (4) (A)-(II), (B)-(III), (C)-(IV), (D)-(I)

**Options :**

92090689201. 1

92090689202. 2

92090689203. 3

92090689204. 4

**Question Number : 1 Question Id : 92090622570 Question Type : MCQ Option Shuffling : No Is Question Mandatory : No Calculator : None Response Time : N.A Think Time : N.A Minimum Instruction Time : 0**

**Correct Marks : 4 Wrong Marks : 1**

Match List I with List II.

Fill in the blanks in list I with appropriate phrasal verbs in list II

- | List I   | List II        |
|--|----------------|
| (A) My Japanese isn't very good but it is enough to_____.                | (I) drop out   |
| (B) I ran in a Marathon last week but I had to_____ after 15 kilometers. | (II) show up   |
| (C) I had gone to meet my friend but she didn't_____.                    | (III) look out |
| (D) I request you to_____ for my sister when I am away.                  | (IV) get by    |

Choose the correct answer from the options given below :

- (1) (A)-(II), (B)-(IV), (C)-(III), (D)-(I)
- (2) (A)-(II), (B)-(III), (C)-(I), (D)-(IV)
- (3) (A)-(IV), (B)-(I), (C)-(II), (D)-(III)
- (4) (A)-(II), (B)-(III), (C)-(IV), (D)-(I)

**Options :**

- 92090689201. 1
- 92090689202. 2
- 92090689203. 3
- 92090689204. 4

**Question Number : 2 Question Id : 92090622571 Question Type : MCQ Option Shuffling : No Is Question Mandatory : No Calculator : None Response Time : N.A Think Time : N.A Minimum Instruction Time : 0**

**Correct Marks : 4 Wrong Marks : 1**

Match List I with List II

Fill in the correct prepositions in the blanks.

List I

- (A) The light switch is \_\_\_\_ the door.
- (B) She lives \_\_\_\_ bread and eggs.
- (C) Sunscreen can protect you \_\_\_\_\_ the Sun.
- (D) He specializes\_\_\_\_\_ sports photography.

List II

- (I) in
- (II) against
- (III) by
- (IV) on

Choose the correct answer from the options given below :

- (1) (A)-(III), (B)-(IV), (C)-(I), (D)-(II)
- (2) (A)-(III), (B)-(IV), (C)-(II), (D)-(I)
- (3) (A)-(IV), (B)-(III), (C)-(I), (D)-(II)
- (4) (A)-(II), (B)-(III), (C)-(IV), (D)-(I)

Options :

- 92090689205. 1
- 92090689206. 2
- 92090689207. 3
- 92090689208. 4

**Question Number : 2 Question Id : 92090622571 Question Type : MCQ Option Shuffling : No Is Question Mandatory : No Calculator : None Response Time : N.A Think Time : N.A Minimum Instruction Time : 0**

**Correct Marks : 4 Wrong Marks : 1**

Match List I with List II

Fill in the correct prepositions in the blanks.

List I

- (A) The light switch is \_\_\_\_ the door.
- (B) She lives \_\_\_\_ bread and eggs.
- (C) Sunscreen can protect you \_\_\_\_\_ the Sun.
- (D) He specializes\_\_\_\_\_ sports photography.

List II

- (I) in
- (II) against
- (III) by
- (IV) on

Choose the correct answer from the options given below :

- (1) (A)-(III), (B)-(IV), (C)-(I), (D)-(II)
- (2) (A)-(III), (B)-(IV), (C)-(II), (D)-(I)
- (3) (A)-(IV), (B)-(III), (C)-(I), (D)-(II)
- (4) (A)-(II), (B)-(III), (C)-(IV), (D)-(I)

Options :

92090689205. 1  
92090689206. 2  
92090689207. 3  
92090689208. 4

**Question Number : 3 Question Id : 92090622572 Question Type : MCQ Option Shuffling : No Is Question Mandatory : No Calculator : None Response Time : N.A Think Time : N.A Minimum Instruction Time : 0**

**Correct Marks : 4 Wrong Marks : 1**

Out of the following options, select the word that is correctly spelt:-

- |                 |                 |
|-----------------|-----------------|
| (1) COMRADERIE  | (2) CAMARADERIE |
| (3) CAMEREDERIE | (4) CAMAREDERIE |

**Options :**

92090689209. 1  
92090689210. 2  
92090689211. 3  
92090689212. 4

**Question Number : 3 Question Id : 92090622572 Question Type : MCQ Option Shuffling : No Is Question Mandatory : No Calculator : None Response Time : N.A Think Time : N.A Minimum Instruction Time : 0**

**Correct Marks : 4 Wrong Marks : 1**

Out of the following options, select the word that is correctly spelt:-

- |                 |                 |
|-----------------|-----------------|
| (1) COMRADERIE  | (2) CAMARADERIE |
| (3) CAMEREDERIE | (4) CAMAREDERIE |

**Options :**

92090689209. 1  
92090689210. 2  
92090689211. 3  
92090689212. 4

**Question Number : 4 Question Id : 92090622573 Question Type : MCQ Option Shuffling : No Is Question Mandatory : No Calculator : None Response Time : N.A Think Time : N.A Minimum Instruction Time : 0**

**Correct Marks : 4 Wrong Marks : 1**

Out of the following options, select the word that is correctly spelt:-

- |                  |                   |
|------------------|-------------------|
| (1) SACRILIGIOUS | (2) SACRILIGIOUSE |
| (3) SACRILEGIOUS | (4) SACRIELEGIOUS |

**Options :**

- 92090689213. 1
- 92090689214. 2
- 92090689215. 3
- 92090689216. 4

**Question Number : 4 Question Id : 92090622573 Question Type : MCQ Option Shuffling : No Is Question Mandatory : No Calculator : None Response Time : N.A Think Time : N.A Minimum Instruction Time : 0**

**Correct Marks : 4 Wrong Marks : 1**

Out of the following options, select the word that is correctly spelt:-

- |                  |                   |
|------------------|-------------------|
| (1) SACRILIGIOUS | (2) SACRILIGIOUSE |
| (3) SACRILEGIOUS | (4) SACRIELEGIOUS |

**Options :**

- 92090689213. 1
- 92090689214. 2
- 92090689215. 3
- 92090689216. 4

**Question Number : 5 Question Id : 92090622574 Question Type : MCQ Option Shuffling : No Is Question Mandatory : No Calculator : None Response Time : N.A Think Time : N.A Minimum Instruction Time : 0**

**Correct Marks : 4 Wrong Marks : 1**

Rearrange the following sentences to make a meaningful paragraph:

- (A) More than a million coastal residents have already migrated North.
- (B) The Sundarbans spans nearly 4000 square miles of India and Bangladesh along the Bay of Bengal.
- (C) For the 7.5 million people who live in the region, the forest is a natural barrier against tides and cyclones.
- (D) The world's largest continuous Mangrove forest, it's home to a wide variety of species.
- (E) But as people cut trees and rising seas bring saline waters, the forest and the land itself are shrinking

Choose the correct option :

- (1) (A), (C), (D), (B), (E)
- (2) (B), (C), (D), (A), (E)
- (3) (D), (C), (B), (E), (A)
- (4) (B), (D), (C), (E), (A)

**Options :**

92090689217. 1

92090689218. 2

92090689219. 3

92090689220. 4

**Question Number : 5 Question Id : 92090622574 Question Type : MCQ Option Shuffling : No Is Question Mandatory : No Calculator : None Response Time : N.A Think Time : N.A Minimum Instruction Time : 0**

**Correct Marks : 4 Wrong Marks : 1**

Rearrange the following sentences to make a meaningful paragraph:

- (A) More than a million coastal residents have already migrated North.
- (B) The Sundarbans spans nearly 4000 square miles of India and Bangladesh along the Bay of Bengal.
- (C) For the 7.5 million people who live in the region, the forest is a natural barrier against tides and cyclones.
- (D) The world's largest continuous Mangrove forest, it's home to a wide variety of species.
- (E) But as people cut trees and rising seas bring saline waters, the forest and the land itself are shrinking

Choose the correct option :

- (1) (A), (C), (D), (B), (E)
- (2) (B), (C), (D), (A), (E)
- (3) (D), (C), (B), (E), (A)
- (4) (B), (D), (C), (E), (A)

**Options :**

92090689217. 1

92090689218. 2

92090689219. 3

92090689220. 4

**Question Number : 6 Question Id : 92090622575 Question Type : MCQ Option Shuffling : No Is Question Mandatory : No Calculator : None Response Time : N.A Think Time : N.A Minimum Instruction Time : 0**

**Correct Marks : 4 Wrong Marks : 1**



Rearrange the following sentences to make a meaningful paragraph:

- (A) Instead, they have found a greater sense of agency and empowerment, as they use fashion to express their identity and style.
- (B) Consumers are no longer content with simply following trends or buying into fast fashion.
- (C) Since the consumer has become more conscientious, a quiet but impactful revolution has been brought about in the industry, thus heralding change.
- (D) Presently, fashion's ever-oscillating pendulum has swung in the direction of purpose driven decisions.

Choose the correct options :

- (1) (C), (B), (A), (D)
- (2) (D), (A), (B), (C)
- (3) (D), (B), (A), (C)
- (4) (C), (A), (D), (B)

**Options :**

- 92090689221. 1
- 92090689222. 2
- 92090689223. 3
- 92090689224. 4

**Question Number : 6 Question Id : 92090622575 Question Type : MCQ Option Shuffling : No Is Question Mandatory : No Calculator : None Response Time : N.A Think Time : N.A Minimum Instruction Time : 0**

**Correct Marks : 4 Wrong Marks : 1**

Rearrange the following sentences to make a meaningful paragraph:

- (A) Instead, they have found a greater sense of agency and empowerment, as they use fashion to express their identity and style.
- (B) Consumers are no longer content with simply following trends or buying into fast fashion.
- (C) Since the consumer has become more conscientious, a quiet but impactful revolution has been brought about in the industry, thus heralding change.
- (D) Presently, fashion's ever-oscillating pendulum has swung in the direction of purpose driven decisions.

Choose the correct options :

- (1) (C), (B), (A), (D)
- (2) (D), (A), (B), (C)
- (3) (D), (B), (A), (C)
- (4) (C), (A), (D), (B)

**Options :**

- 92090689221. 1
- 92090689222. 2
- 92090689223. 3
- 92090689224. 4

**Question Number : 7 Question Id : 92090622576 Question Type : MCQ Option Shuffling : No Is Question Mandatory : No Calculator : None Response Time : N.A Think Time : N.A Minimum Instruction Time : 0**

**Correct Marks : 4 Wrong Marks : 1**

Which of the words / phrases given below the following sentence should replace the word / phrase given in capitals to make it grammatically correct:

The recent spate of burglaries in addition to the frequent power cuts in Birla Housing society **HAVE MADE** the disgruntled residents protest against the management.

- (1) had made
- (2) has made
- (3) made
- (4) No error

**Options :**

- 92090689225. 1
- 92090689226. 2
- 92090689227. 3
- 92090689228. 4

**Question Number : 7 Question Id : 92090622576 Question Type : MCQ Option Shuffling : No Is Question Mandatory : No Calculator : None Response Time : N.A Think Time : N.A Minimum Instruction Time : 0**

**Correct Marks : 4 Wrong Marks : 1**

Which of the words / phrases given below the following sentence should replace the word / phrase given in capitals to make it grammatically correct:

The recent spate of burglaries in addition to the frequent power cuts in Birla Housing society HAVE MADE the disgruntled residents protest against the management.

- |              |              |
|--------------|--------------|
| (1) had made | (2) has made |
| (3) made     | (4) No error |

**Options :**

- 92090689225. 1
- 92090689226. 2
- 92090689227. 3
- 92090689228. 4

**Question Number : 8 Question Id : 92090622577 Question Type : MCQ Option Shuffling : No Is Question Mandatory : No Calculator : None Response Time : N.A Think Time : N.A Minimum Instruction Time : 0**

**Correct Marks : 4 Wrong Marks : 1**

One of the first fish we dissected had plastic in its gut. What harm such plastic is causing has unsettled science. Plastic reduces the appetites and growth rate of fish that consume it. That could affect reproduction and population size.

Choose the sentence that completes the paragraph:

- (1) Flying fish appear to eat plastic especially frequently.
- (2) Small changes in the survival of larval fish can translate into large changes in fish populations.
- (3) The larger a female fish is, the more eggs she can carry and the higher number of offspring she can produce.
- (4) We didn't expect so much plastic, in a fish that was first a quarter inch long.

**Options :**

- 92090689229. 1
- 92090689230. 2
- 92090689231. 3
- 92090689232. 4

**Question Number : 8 Question Id : 92090622577 Question Type : MCQ Option Shuffling : No Is Question Mandatory : No Calculator : None Response Time : N.A Think Time : N.A Minimum Instruction Time : 0**

**Correct Marks : 4 Wrong Marks : 1**

One of the first fish we dissected had plastic in its gut. What harm such plastic is causing has unsettled science. Plastic reduces the appetites and growth rate of fish that consume it. That could affect reproduction and population size.

Choose the sentence that completes the paragraph:

- (1) Flying fish appear to eat plastic especially frequently.
- (2) Small changes in the survival of larval fish can translate into large changes in fish populations.
- (3) The larger a female fish is, the more eggs she can carry and the higher number of offspring she can produce.
- (4) We didn't expect so much plastic, in a fish that was first a quarter inch long.

**Options :**

92090689229. 1

92090689230. 2

92090689231. 3

92090689232. 4

**Question Number : 9 Question Id : 92090622578 Question Type : MCQ Option Shuffling : No Is Question Mandatory : No Calculator : None Response Time : N.A Think Time : N.A Minimum Instruction Time : 0**

**Correct Marks : 4 Wrong Marks : 1**

A part of the sentence given below is underlined.

Choose the correct alternative to improve underlined part of the sentence.

He seemed very confident and responsible about his work and could make independent decisions. So, I left him with his own devices.

- |                                  |                                    |
|----------------------------------|------------------------------------|
| (1) left him in his own devices. | (2) left him to his own devices.   |
| (3) left him on his own devices. | (4) left him with his own devices. |

**Options :**

92090689233. 1

92090689234. 2

92090689235. 3

92090689236. 4

**Question Number : 9 Question Id : 92090622578 Question Type : MCQ Option Shuffling : No Is Question Mandatory : No Calculator : None Response Time : N.A Think Time : N.A Minimum**

**Instruction Time : 0**

**Correct Marks : 4 Wrong Marks : 1**

A part of the sentence given below is underlined.

Choose the correct alternative to improve underlined part of the sentence.

He seemed very confident and responsible about his work and could make independent decisions. So, I left him with his own devices.

- (1) left him in his own devices.                      (2) left him to his own devices.  
(3) left him on his own devices.                      (4) left him with his own devices.

**Options :**

92090689233. 1  
92090689234. 2  
92090689235. 3  
92090689236. 4

**Question Number : 10 Question Id : 92090622579 Question Type : MCQ Option Shuffling : No Is Question Mandatory : No Calculator : None Response Time : N.A Think Time : N.A Minimum Instruction Time : 0**

**Correct Marks : 4 Wrong Marks : 1**

Match the words in list I with their meanings in list II

- | List I            | List II          |
|-------------------|------------------|
| (A) debase        | (I) contracted   |
| (B) analogy       | (II) notion      |
| (C) foreshortened | (III) degrade    |
| (D) conception    | (IV) correlation |

Choose the correct answer from the options given below :

- (1) (A)-(IV), (B)-(II), (C)-(III), (D)-(I)  
(2) (A)-(III), (B)-(IV), (C)-(I), (D)-(II)  
(3) (A)-(III), (B)-(IV), (C)-(II), (D)-(I)  
(4) (A)-(II), (B)-(III), (C)-(IV), (D)-(I)

**Options :**

92090689237. 1  
92090689238. 2  
92090689239. 3  
92090689240. 4

**Question Number : 10 Question Id : 92090622579 Question Type : MCQ Option Shuffling : No Is Question Mandatory : No Calculator : None Response Time : N.A Think Time : N.A Minimum Instruction Time : 0**

**Correct Marks : 4 Wrong Marks : 1**

Match the words in list I with their meanings in list II

List I

- (A) debase
- (B) analogy
- (C) foreshortened
- (D) conception

List II

- (I) contracted
- (II) notion
- (III) degrade
- (IV) correlation

Choose the correct answer from the options given below :

- (1) (A)-(IV), (B)-(II), (C)-(III), (D)-(I)
- (2) (A)-(III), (B)-(IV), (C)-(I), (D)-(II)
- (3) (A)-(III), (B)-(IV), (C)-(II), (D)-(I)
- (4) (A)-(II), (B)-(III), (C)-(IV), (D)-(I)

**Options :**

92090689237. 1

92090689238. 2

92090689239. 3

92090689240. 4

**Sub-Section Number :**

2

**Sub-Section Id :**

920906722

**Question Shuffling Allowed :**

No

**Is Section Default? :**

null

**Question Id : 92090622580 Question Type : COMPREHENSION Sub Question Shuffling Allowed :  
Yes Group Comprehension Questions : No Question Pattern Type : NonMatrix Calculator : None  
Response Time : N.A Think Time : N.A Minimum Instruction Time : 0**

**Question Numbers : (11 to 14)**

Question Label : Comprehension

Read the passage and answer the next five question by choosing the correct option:

Dealing with teenage offspring can be exasperating, because they come up with the darndest questions: "Why should I be good when being bad appears to be more beneficial"?

One must then attempt to untangle deep issues of history, philosophy and evolutionary biology, in order to answer that question convincingly and correctly. In today's world of power-crazy the billionaires and an over-supply of despots, can one even fault the youngster for asking?

Thankfully, science has shown, over and over, that in the long run, it is more beneficial for the individual to be good. One such batch of studies comes to us from Daher Keltner, a professor of psychology at university of California, Berkeley, and founder-director of the Greater Good Science Center, founded in 2001. For decades, he and his team of researcher's have been studying are origins and evolution of good in human beings. In one such project, they studied the brains of people who engaged in acts of altruism, and discovered that such acts activate the same circuits that respond to receiving a gift. Evidence collected over years also has it that people who engage in acts of altruism live longer.

Keltner distils some of these findings in his book, Born to be Good (2009), which I am hoping my young ones can take time away from their Reels in order to read.

The whys are not all clear yet. But other contemporary studies support the Center's findings. Humans do good because it makes them feel good.

Where does the desire to do good come from? It is an evolved trait. Altruism is the willingness to do something that confers an advantage on others, even if the outcome may result in a disadvantage for oneself.

There is a school of thought that argues that all altruism is really self-interest in disguise. The writer and philosopher Ayn Rand believed that any behaviour that benefits others is ultimately motivated by a desire for personal gain, whether material, emotional or psychological. The evolutionary biologistiour was ultimately motivated by the desire to pass on one's genes. Since this meant that humans had to (and have to) sometimes simulate altruism, that is what we learnt to do.

These arguments fail to explain genuine altruism. Why do whistle-blowers expose corruption at great personal cost? Or protesters fight for a cause when it can, and often does, cost them years or more behind bars?

Perhaps one of the most compelling arguments against Rand and Dawkins emerges from the pages of Matt Ridley's the Origins of Virtue (1996). While Ridley concedes that self-interest is a strong motivator, he believes that individuals figured out early on that it felt better to cooperate, and yielded better results for the group. And so it is that we evolved to be kind, empathetic, even selfless.

How do we know that this was an 3evolution? Because many anthropologists date civilization not to the first settlements or agriculture or art, but to the first healed femur. At some point, prehistoric humans decided they would no longer leave the seriously wounded behind. They would find the time and resources to care for them, even though there was no material benefit involved. In Ridley calls this "reciprocal altruism".

In this form of cooperation, individuals help each other with the expectation that the favour will be returned, if needed. From that idea, we can trace the evolution of ideas of community, and wider social progress. It is the foundation on which cultures and even economic frameworks continue to be built.

For the young ones who believe "good" is the old way and doing what suits on best is the need of today. I would argue that is not adapting, it's succumbing to a series of short-term goals guaranteed to provide dwindling levels of satisfaction. It has always been tempting, and often more immediately beneficial, to be selfish. We would have been a short-lived species if we'd all sought only to please ourselves.

## Sub questions

Question Number : 11 Question Id : 92090622581 Question Type : MCQ Option Shuffling : No Is Question Mandatory : No Calculator : None Response Time : N.A Think Time : N.A Minimum

**Instruction Time : 0**

**Correct Marks : 4 Wrong Marks : 1**

Human beings have made space for altruism in their lives because:

- (A) It has been proven that it makes them live longer.
- (B) It makes them feel good about themselves.
- (C) It provides dwindling level of satisfaction.
- (D) It is the need of the hour.
- (E) It brings satisfaction to pass on good habits to their offsprings.

Choose the correct answer from the options given below :

- (1) (C), (D) & (E) only
- (2) (B), (C) & (D) only
- (3) (A), (B) & (E) only
- (4) (A), (C) & (E) only

**Options :**

- 92090689241. 1
- 92090689242. 2
- 92090689243. 3
- 92090689244. 4

**Question Number : 12 Question Id : 92090622582 Question Type : MCQ Option Shuffling : No Is Question Mandatory : No Calculator : None Response Time : N.A Think Time : N.A Minimum Instruction Time : 0**

**Correct Marks : 4 Wrong Marks : 1**

Choose statement that prove that the author advocates Altruism:

- (1) Scientific studies indicate, that in the long run, it is more beneficial for the individual to be good
- (2) It has always been tempting and often more immediately beneficial, to the selfish.
- (3) In this form of cooperation, individuals help each other with the expectation that the favour will be returned.
- (4) Selfishness offers dwindling returns, and would have made us a short lived species.

**Options :**

- 92090689245. 1
- 92090689246. 2
- 92090689247. 3
- 92090689248. 4



**Question Number : 13 Question Id : 92090622583 Question Type : MCQ Option Shuffling : No Is Question Mandatory : No Calculator : None Response Time : N.A Think Time : N.A Minimum Instruction Time : 0**

**Correct Marks : 4 Wrong Marks : 1**

Match the statements in List I with the appropriate defining word :

- | List I   | List II                   |
|--|---------------------------|
| (A) A desire to do good with the expectation of favour being returned. | (I) Simulated altruism    |
| (B) A desire to do good for personal gains                             | (II) Genuine altruism     |
| (C) A desire to do good with the hope to pass on genes.                | (III) Reciprocal altruism |
| (D) A desire to do good at the cost of self harm.                      | (IV) Selfish altruism     |

Choose the correct answer from the options given below:

- (1) (A)-(III), (B)-(IV), (C)-(I), (D)-(II)
- (2) (A)-(IV), (B)-(III), (C)-(II), (D)-(I)
- (3) (A)-(II), (B)-(I), (C)-(III), (D)-(IV)
- (4) (A)-(I), (B)-(II), (C)-(IV), (D)-(III)

**Options :**

92090689249. 1

92090689250. 2

92090689251. 3

92090689252. 4

**Question Number : 14 Question Id : 92090622584 Question Type : MCQ Option Shuffling : No Is Question Mandatory : No Calculator : None Response Time : N.A Think Time : N.A Minimum Instruction Time : 0**

**Correct Marks : 4 Wrong Marks : 1**

Choose statements that support the following statement:

“Human beings evolved to be kind, empathic, even selfless.”

- (A) Any behaviour that benefits others is ultimately motivated by a desire for personal gain.
- (B) Any behaviour that stems from the expectation that the favour will be returned helped the community in their social progress.
- (C) Any behaviour is ultimately motivated by the desire to pass on one's genes.
- (D) Any behaviour that required to cooperate with others, yielded better results for the group.

Choose the correct answer from the options given below :

- (1) (A) & (B) only
- (2) (B) & (C) only
- (3) (C) & (D) only
- (4) (B) & (D) only

**Options :**

- 92090689253. 1
- 92090689254. 2
- 92090689255. 3
- 92090689256. 4

**Question Id : 92090622580 Question Type : COMPREHENSION Sub Question Shuffling Allowed : Yes Group Comprehension Questions : No Question Pattern Type : NonMatrix Calculator : None Response Time : N.A Think Time : N.A Minimum Instruction Time : 0**

**Question Numbers : (11 to 14)**

Question Label : Comprehension

Read the passage and answer the next five question by choosing the correct option:

Dealing with teenage offspring can be exasperating, because they come up with the darndest questions: "Why should I be good when being bad appears to be more beneficial"?

One must then attempt to untangle deep issues of history, philosophy and evolutionary biology, in order to answer that question convincingly and correctly. In today's world of power-crazy the billionaires and an over-supply of despots, can one even fault the youngster for asking?

Thankfully, science has shown, over and over, that in the long run, it is more beneficial for the individual to be good. One such batch of studies comes to us from Daher Keltner, a professor of psychology at university of California, Berkeley, and founder-director of the Greater Good Science Center, founded in 2001. For decades, he and his team of researcher's have been studying are origins and evolution of good in human beings. In one such project, they studied the brains of people who engaged in acts of altruism, and discovered that such acts activate the same circuits that respond to receiving a gift. Evidence collected over years also has it that people who engage in acts of altruism live longer.

Keltner distils some of these findings in his book, Born to be Good (2009), which I am hoping my young ones can take time away from their Reels in order to read.

The whys are not all clear yet. But other contemporary studies support the Center's findings. Humans do good because it makes them feel good.

Where does the desire to do good come from? It is an evolved trait. Altruism is the willingness to do something that confers an advantage on others, even if the outcome may result in a disadvantage for oneself.

There is a school of thought that argues that all altruism is really self-interest in disguise. The writer and philosopher Ayn Rand believed that any behaviour that benefits others is ultimately motivated by a desire for personal gain, whether material, emotional or psychological. The evolutionary biologistiour was ultimately motivated by the desire to pass on one's genes. Since this meant that humans had to (and have to) sometimes simulate altruism, that is what we learnt to do.

These arguments fail to explain genuine altruism. Why do whistle-blowers expose corruption at great personal cost? Or protesters fight for a cause when it can, and often does, cost them years or more behind bars?

Perhaps one of the most compelling arguments against Rand and Dawkins emerges from the pages of Matt Ridley's the Origins of Virtue (1996). While Ridley concedes that self-interest is a strong motivator, he believes that individuals figured out early on that it felt better to cooperate, and yielded better results for the group. And so it is that we evolved to be kind, empathetic, even selfless.

How do we know that this was an 3evolution? Because many anthropologists date civilization not to the first settlements or agriculture or art, but to the first healed femur. At some point, prehistoric humans decided they would no longer leave the seriously wounded behind. They would find the time and resources to care for them, even though there was no material benefit involved. In Ridley calls this "reciprocal altruism".

In this form of cooperation, individuals help each other with the expectation that the favour will be returned, if needed. From that idea, we can trace the evolution of ideas of community, and wider social progress. It is the foundation on which cultures and even economic frameworks continue to be built.

For the young ones who believe "good" is the old way and doing what suits on best is the need of today. I would argue that is not adapting, it's succumbing to a series of short-term goals guaranteed to provide dwindling levels of satisfaction. It has always been tempting, and often more immediately beneficial, to be selfish. We would have been a short-lived species if we'd all sought only to please ourselves.

## Sub questions

Question Number : 11 Question Id : 92090622581 Question Type : MCQ Option Shuffling : No Is Question Mandatory : No Calculator : None Response Time : N.A Think Time : N.A Minimum

**Instruction Time : 0**

**Correct Marks : 4 Wrong Marks : 1**

Human beings have made space for altruism in their lives because:

- (A) It has been proven that it makes them live longer.
- (B) It makes them feel good about themselves.
- (C) It provides dwindling level of satisfaction.
- (D) It is the need of the hour.
- (E) It brings satisfaction to pass on good habits to their offsprings.

Choose the correct answer from the options given below :

- (1) (C), (D) & (E) only
- (2) (B), (C) & (D) only
- (3) (A), (B) & (E) only
- (4) (A), (C) & (E) only

**Options :**

- 92090689241. 1
- 92090689242. 2
- 92090689243. 3
- 92090689244. 4

**Question Number : 12 Question Id : 92090622582 Question Type : MCQ Option Shuffling : No Is Question Mandatory : No Calculator : None Response Time : N.A Think Time : N.A Minimum Instruction Time : 0**

**Correct Marks : 4 Wrong Marks : 1**

Choose statement that prove that the author advocates Altruism:

- (1) Scientific studies indicate, that in the long run, it is more beneficial for the individual to be good
- (2) It has always been tempting and often more immediately beneficial, to the selfish.
- (3) In this form of cooperation, individuals help each other with the expectation that the favour will be returned.
- (4) Selfishness offers dwindling returns, and would have made us a short lived species.

**Options :**

- 92090689245. 1
- 92090689246. 2
- 92090689247. 3
- 92090689248. 4

**Question Number : 13 Question Id : 92090622583 Question Type : MCQ Option Shuffling : No Is Question Mandatory : No Calculator : None Response Time : N.A Think Time : N.A Minimum Instruction Time : 0**

**Correct Marks : 4 Wrong Marks : 1**

Match the statements in List I with the appropriate defining word :

- | List I   | List II                   |
|--|---------------------------|
| (A) A desire to do good with the expectation of favour being returned. | (I) Simulated altruism    |
| (B) A desire to do good for personal gains                             | (II) Genuine altruism     |
| (C) A desire to do good with the hope to pass on genes.                | (III) Reciprocal altruism |
| (D) A desire to do good at the cost of self harm.                      | (IV) Selfish altruism     |

Choose the correct answer from the options given below:

- (1) (A)-(III), (B)-(IV), (C)-(I), (D)-(II)
- (2) (A)-(IV), (B)-(III), (C)-(II), (D)-(I)
- (3) (A)-(II), (B)-(I), (C)-(III), (D)-(IV)
- (4) (A)-(I), (B)-(II), (C)-(IV), (D)-(III)

**Options :**

92090689249. 1

92090689250. 2

92090689251. 3

92090689252. 4

**Question Number : 14 Question Id : 92090622584 Question Type : MCQ Option Shuffling : No Is Question Mandatory : No Calculator : None Response Time : N.A Think Time : N.A Minimum Instruction Time : 0**

**Correct Marks : 4 Wrong Marks : 1**

Choose statements that support the following statement:

“Human beings evolved to be kind, empathic, even selfless.”

- (A) Any behaviour that benefits others is ultimately motivated by a desire for personal gain.
- (B) Any behaviour that stems from the expectation that the favour will be returned helped the community in their social progress.
- (C) Any behaviour is ultimately motivated by the desire to pass on one's genes.
- (D) Any behaviour that required to cooperate with others, yielded better results for the group.

Choose the correct answer from the options given below :

- (1) (A) & (B) only
- (2) (B) & (C) only
- (3) (C) & (D) only
- (4) (B) & (D) only

**Options :**

- 92090689253. 1
- 92090689254. 2
- 92090689255. 3
- 92090689256. 4

<b>Sub-Section Number :</b>	3
<b>Sub-Section Id :</b>	920906723
<b>Question Shuffling Allowed :</b>	Yes
<b>Is Section Default? :</b>	null

**Question Number : 15 Question Id : 92090622585 Question Type : MCQ Option Shuffling : No Is Question Mandatory : No Calculator : None Response Time : N.A Think Time : N.A Minimum Instruction Time : 0 Correct Marks : 4 Wrong Marks : 1**

Choose the appropriate answer elaborating meaning of 'Altruism'.

- (A) Principle for living selflessly
- (B) Charitable
- (C) Humanitarian
- (D) Impolite and unsocial

Choose the correct answer from the options given below :

- (1) (A) and (B) only
- (2) (D) only
- (3) (A), (B) and (D) only
- (4) (A), (B) and (C) only

**Options :**

- 92090689257. 1
- 92090689258. 2
- 92090689259. 3
- 92090689260. 4

**Question Number : 15 Question Id : 92090622585 Question Type : MCQ Option Shuffling : No Is Question Mandatory : No Calculator : None Response Time : N.A Think Time : N.A Minimum Instruction Time : 0**

**Correct Marks : 4 Wrong Marks : 1**

Choose the appropriate answer elaborating meaning of 'Altruism'.

- (A) Principle for living selflessly
- (B) Charitable
- (C) Humanitarian
- (D) Impolite and unsocial

Choose the correct answer from the options given below :

- (1) (A) and (B) only
- (2) (D) only
- (3) (A), (B) and (D) only
- (4) (A), (B) and (C) only

**Options :**

- 92090689257. 1
- 92090689258. 2
- 92090689259. 3
- 92090689260. 4

**Question Number : 16 Question Id : 92090622586 Question Type : MCQ Option Shuffling : No Is Question Mandatory : No Calculator : None Response Time : N.A Think Time : N.A Minimum Instruction Time : 0**

**Correct Marks : 4 Wrong Marks : 1**

Choose the appropriate one word substitute for:-

A position requiring little or no work but giving its holder status or financial benefit

- |              |              |
|--------------|--------------|
| (1) Cynosure | (2) Sinecure |
| (3) Honorary | (4) Ad hoc   |

**Options :**

92090689261. 1

92090689262. 2

92090689263. 3

92090689264. 4

**Question Number : 16 Question Id : 92090622586 Question Type : MCQ Option Shuffling : No Is Question Mandatory : No Calculator : None Response Time : N.A Think Time : N.A Minimum Instruction Time : 0**

**Correct Marks : 4 Wrong Marks : 1**

Choose the appropriate one word substitute for:-

A position requiring little or no work but giving its holder status or financial benefit

- |              |              |
|--------------|--------------|
| (1) Cynosure | (2) Sinecure |
| (3) Honorary | (4) Ad hoc   |

**Options :**

92090689261. 1

92090689262. 2

92090689263. 3

92090689264. 4

**Question Number : 17 Question Id : 92090622587 Question Type : MCQ Option Shuffling : No Is Question Mandatory : No Calculator : None Response Time : N.A Think Time : N.A Minimum Instruction Time : 0**

**Correct Marks : 4 Wrong Marks : 1**



As we embark on a new academic year, we have to put our hand to plough if we have to make it worthwhile.

While of the following options correctly explains the underlined Idiom:

- (1) To take up agricultural farming (2) To take up technical work  
(3) To get involved in irrelevant things (4) To take up difficult tasks

**Options :**

92090689265. 1  
92090689266. 2  
92090689267. 3  
92090689268. 4

**Question Number : 17 Question Id : 92090622587 Question Type : MCQ Option Shuffling : No Is Question Mandatory : No Calculator : None Response Time : N.A Think Time : N.A Minimum Instruction Time : 0**

**Correct Marks : 4 Wrong Marks : 1**

As we embark on a new academic year, we have to put our hand to plough if we have to make it worthwhile.

While of the following options correctly explains the underlined Idiom:

- (1) To take up agricultural farming (2) To take up technical work  
(3) To get involved in irrelevant things (4) To take up difficult tasks

**Options :**

92090689265. 1  
92090689266. 2  
92090689267. 3  
92090689268. 4

**Question Number : 18 Question Id : 92090622588 Question Type : MCQ Option Shuffling : No Is Question Mandatory : No Calculator : None Response Time : N.A Think Time : N.A Minimum Instruction Time : 0**

**Correct Marks : 4 Wrong Marks : 1**

The official at the white House committed a serious faux pas when he violated the protocol by asking the Japanese ambassador to show his identity.

Which of the following words can replace the underlined word without changing the meaning of the given sentence:

- (1) Furore (2) Embarrassing blunder  
(3) Error of indiscipline (4) An illegal action

**Options :**

- 92090689269. 1
- 92090689270. 2
- 92090689271. 3
- 92090689272. 4

**Question Number : 18 Question Id : 92090622588 Question Type : MCQ Option Shuffling : No Is Question Mandatory : No Calculator : None Response Time : N.A Think Time : N.A Minimum Instruction Time : 0**

**Correct Marks : 4 Wrong Marks : 1**

The official at the white House committed a serious faux pas when he violated the protocol by asking the Japanese ambassador to show his identity.

Which of the following words can replace the underlined word without changing the meaning of the given sentence:

- (1) Furore
- (2) Embarrassing blunder
- (3) Error of indiscipline
- (4) An illegal action

**Options :**

- 92090689269. 1
- 92090689270. 2
- 92090689271. 3
- 92090689272. 4

**Question Number : 19 Question Id : 92090622589 Question Type : MCQ Option Shuffling : No Is Question Mandatory : No Calculator : None Response Time : N.A Think Time : N.A Minimum Instruction Time : 0**

**Correct Marks : 4 Wrong Marks : 1**

But for the sagacious decisions taken by the CEO of the company, the company would have gone bankrupt.

Which of the following words can replace the underlined word without changing the meaning of the sentence:

- (1) Wise
- (2) Dogmatic
- (3) Dubious
- (4) Dense

**Options :**

- 92090689273. 1
- 92090689274. 2
- 92090689275. 3
- 92090689276. 4

**Question Number : 19 Question Id : 92090622589 Question Type : MCQ Option Shuffling : No Is Question Mandatory : No Calculator : None Response Time : N.A Think Time : N.A Minimum Instruction Time : 0**

**Correct Marks : 4 Wrong Marks : 1**

But for the sagacious decisions taken by the CEO of the company, the company would have gone bankrupt.

Which of the following words can replace the underlined word without changing the meaning of the sentence:

- |             |              |
|-------------|--------------|
| (1) Wise    | (2) Dogmatic |
| (3) Dubious | (4) Dense    |

**Options :**

- 92090689273. 1
- 92090689274. 2
- 92090689275. 3
- 92090689276. 4

**Question Number : 20 Question Id : 92090622590 Question Type : MCQ Option Shuffling : No Is Question Mandatory : No Calculator : None Response Time : N.A Think Time : N.A Minimum Instruction Time : 0**

**Correct Marks : 4 Wrong Marks : 1**

The actor was forced to run the gauntlet of jeering reporters for having featured in a tobacco promotion advertisement.

The underlined idiom implies that the actor:

- (1) Had to risk losing his life
- (2) Had to speak unpleasantly to reporters
- (3) Had to sit in judgement over reporters
- (4) Had to deal with a number of rude reporters

**Options :**

- 92090689277. 1
- 92090689278. 2
- 92090689279. 3
- 92090689280. 4

**Question Number : 20 Question Id : 92090622590 Question Type : MCQ Option Shuffling : No Is Question Mandatory : No Calculator : None Response Time : N.A Think Time : N.A Minimum Instruction Time : 0**

**Correct Marks : 4 Wrong Marks : 1**

The actor was forced to run the gauntlet of jeering reporters for having featured in a tobacco promotion advertisement.

The underlined idiom implies that the actor:

- (1) Had to risk losing his life
- (2) Had to speak unpleasantly to reporters
- (3) Had to sit in judgement over reporters
- (4) Had to deal with a number of rude reporters

**Options :**

92090689277. 1

92090689278. 2

92090689279. 3

92090689280. 4

## Part B

<b>Section Id :</b>	920906448
<b>Section Number :</b>	2
<b>Section type :</b>	Online
<b>Mandatory or Optional :</b>	Mandatory
<b>Number of Questions :</b>	80
<b>Number of Questions to be attempted :</b>	80
<b>Section Marks :</b>	320
<b>Enable Mark as Answered Mark for Review and Clear Response :</b>	Yes
<b>Maximum Instruction Time :</b>	0
<b>Sub-Section Number :</b>	1
<b>Sub-Section Id :</b>	920906724
<b>Question Shuffling Allowed :</b>	Yes
<b>Is Section Default? :</b>	null

**Question Number : 21 Question Id : 92090622591 Question Type : MCQ Option Shuffling : No Is Question Mandatory : No Calculator : None Response Time : N.A Think Time : N.A Minimum Instruction Time : 0**

**Correct Marks : 4 Wrong Marks : 1**

First Hindi Novel to win International Booker prize is 'Tomb of sand' which is English Translation of 'Ret Samadh', written by

- (1) Arundhati Roy
- (2) Rupi Kaur
- (3) Geentanjali Shree
- (4) Kiran Desai

**Options :**

- 92090689281. 1
- 92090689282. 2
- 92090689283. 3
- 92090689284. 4

**Question Number : 21 Question Id : 92090622591 Question Type : MCQ Option Shuffling : No Is Question Mandatory : No Calculator : None Response Time : N.A Think Time : N.A Minimum Instruction Time : 0**

**Correct Marks : 4 Wrong Marks : 1**

अंतर्राष्ट्रीय बुकर पुरस्कार जीतने वाला प्रथम हिंदी उपन्यास "टॉम्ब आफ़ सेंड" का लेखक कौन है, जिसका 'रेत समाधि' से अंग्रेजी में अनुवाद किया गया है ?

- |                   |                |
|-------------------|----------------|
| (1) अरुंधती राय   | (2) रूपी कुमार |
| (3) गीतांजलि श्री | (4) किरण देसाई |

**Options :**

- 92090689281. 1
- 92090689282. 2
- 92090689283. 3
- 92090689284. 4

**Question Number : 22 Question Id : 92090622592 Question Type : MCQ Option Shuffling : No Is Question Mandatory : No Calculator : None Response Time : N.A Think Time : N.A Minimum Instruction Time : 0**

**Correct Marks : 4 Wrong Marks : 1**

Who is the first Indian origin British army officer to trek solo to south pole:

- |                   |                     |
|-------------------|---------------------|
| (1) Bachendri Pal | (2) Harpreet Chandi |
| (3) Sangeeta Bahl | (4) Jyoti Amge      |

**Options :**

- 92090689285. 1
- 92090689286. 2
- 92090689287. 3
- 92090689288. 4

**Question Number : 22 Question Id : 92090622592 Question Type : MCQ Option Shuffling : No Is Question Mandatory : No Calculator : None Response Time : N.A Think Time : N.A Minimum Instruction Time : 0**

**Correct Marks : 4 Wrong Marks : 1**

निम्नलिखित में से कौन भारतीय मूल का/की सैनिक अधिकारी है, जो अकेले दक्षिण ध्रुव पर पहुंचा / पहुंची थी ?

- |                  |                  |
|------------------|------------------|
| (1) बचेंद्री पाल | (2) हरप्रीत चंडी |
| (3) संगीता बहल   | (4) ज्योति आमो   |

**Options :**

92090689285. 1  
92090689286. 2  
92090689287. 3  
92090689288. 4

**Question Number : 23 Question Id : 92090622593 Question Type : MCQ Option Shuffling : No Is Question Mandatory : No Calculator : None Response Time : N.A Think Time : N.A Minimum Instruction Time : 0**

**Correct Marks : 4 Wrong Marks : 1**

The empire in India responsible for laying the foundation of Nalanda University?

- |                  |                    |
|------------------|--------------------|
| (1) Nanda empire | (2) Mauryan empire |
| (3) Gupta empire | (4) Magadhe empire |

**Options :**

92090689289. 1  
92090689290. 2  
92090689291. 3  
92090689292. 4

**Question Number : 23 Question Id : 92090622593 Question Type : MCQ Option Shuffling : No Is Question Mandatory : No Calculator : None Response Time : N.A Think Time : N.A Minimum Instruction Time : 0**

**Correct Marks : 4 Wrong Marks : 1**

भारत में किस साम्राज्य ने नालंदा विश्वविद्यालय की आधार – शिला रखी थी?

- |                     |                     |
|---------------------|---------------------|
| (1) नँद साम्राज्य   | (2) मौर्य साम्राज्य |
| (3) गुप्त साम्राज्य | (4) मगध साम्राज्य   |

**Options :**

92090689289. 1  
92090689290. 2  
92090689291. 3

92090689292. 4

**Question Number : 24 Question Id : 92090622594 Question Type : MCQ Option Shuffling : No Is Question Mandatory : No Calculator : None Response Time : N.A Think Time : N.A Minimum Instruction Time : 0**

**Correct Marks : 4 Wrong Marks : 1**

After approval the copies of constitution were photolithographed by:

- |                                    |                                |
|------------------------------------|--------------------------------|
| (1) The Asiatic Society            | (2) National archives of India |
| (3) Archaeological survey of India | (4) Survey of India            |

**Options :**

- 92090689293. 1
- 92090689294. 2
- 92090689295. 3
- 92090689296. 4

**Question Number : 24 Question Id : 92090622594 Question Type : MCQ Option Shuffling : No Is Question Mandatory : No Calculator : None Response Time : N.A Think Time : N.A Minimum Instruction Time : 0**

**Correct Marks : 4 Wrong Marks : 1**

अनुमोदन के बाद संविधान की प्रतियों को निम्नलिखित में से किसने चित्र – अश्वमुद्रित किया था ?

- |                               |                                  |
|-------------------------------|----------------------------------|
| (1) द एशियाटिक सोसायटी        | (2) भारत का राष्ट्रीय अभिलेखागार |
| (3) भारतीय पुरातत्व सर्वेक्षण | (4) भारतीय सर्वेक्षण             |

**Options :**

- 92090689293. 1
- 92090689294. 2
- 92090689295. 3
- 92090689296. 4

**Question Number : 25 Question Id : 92090622595 Question Type : MCQ Option Shuffling : No Is Question Mandatory : No Calculator : None Response Time : N.A Think Time : N.A Minimum Instruction Time : 0**

**Correct Marks : 4 Wrong Marks : 1**

44<sup>th</sup> Constitutional Amendment Act 1978 deals with:

- |                       |                     |
|-----------------------|---------------------|
| (1) Right to freedom  | (2) Right to speech |
| (3) Right to property | (4) Right to voting |

**Options :**

- 92090689297. 1

92090689298. 2

92090689299. 3

92090689300. 4

**Question Number : 25 Question Id : 92090622595 Question Type : MCQ Option Shuffling : No Is Question Mandatory : No Calculator : None Response Time : N.A Think Time : N.A Minimum Instruction Time : 0**

**Correct Marks : 4 Wrong Marks : 1**

44-वां संविधान संशोधन अधिनियम 1978 किससे संबंधित है?

- |                          |                     |
|--------------------------|---------------------|
| (1) स्वतंत्रता का अधिकार | (2) भाषण का अधिकार  |
| (3) सम्पत्ति का अधिकार   | (4) मतदान का अधिकार |

**Options :**

92090689297. 1

92090689298. 2

92090689299. 3

92090689300. 4

**Question Number : 26 Question Id : 92090622596 Question Type : MCQ Option Shuffling : No Is Question Mandatory : No Calculator : None Response Time : N.A Think Time : N.A Minimum Instruction Time : 0**

**Correct Marks : 4 Wrong Marks : 1**

In 2005 Arundhati Roy was awarded for which collection of essays that were later translated into Hindi under the Title "Nyaay ka Ganit".

- |                                     |                                   |
|-------------------------------------|-----------------------------------|
| (1) The Algebra of Justice          | (2) The Algebra of finite Justice |
| (3) The Algebra of Infinite justice | (4) God of small things           |

**Options :**

92090689301. 1

92090689302. 2

92090689303. 3

92090689304. 4

**Question Number : 26 Question Id : 92090622596 Question Type : MCQ Option Shuffling : No Is Question Mandatory : No Calculator : None Response Time : N.A Think Time : N.A Minimum Instruction Time : 0**

**Correct Marks : 4 Wrong Marks : 1**



अरुंधती रॉय को 2005 में किस निबंध संग्रह के लिए पुरस्कार दिया गया था, जिसका बाद में 'न्याय का गणित' शीर्षक से हिंदी में अनुवाद किया गया?

- (1) द एलजेब्रा ऑफ जस्टिस (2) द एलजेब्रा ऑफ फाइनाइट जस्टिस  
(3) द एलजेब्रा ऑफ इन्फाइनाइट जस्टिस (4) गॉड ऑफ स्माल थिंग्स

**Options :**

92090689301. 1  
92090689302. 2  
92090689303. 3  
92090689304. 4

**Question Number : 27 Question Id : 92090622597 Question Type : MCQ Option Shuffling : No Is Question Mandatory : No Calculator : None Response Time : N.A Think Time : N.A Minimum Instruction Time : 0**

**Correct Marks : 4 Wrong Marks : 1**

Who is the first Indian to cross English channel twice?

- (1) Arati Saha (2) Mihir Sen  
(3) Bula Choudhry (4) Preethi Srinivasan

**Options :**

92090689305. 1  
92090689306. 2  
92090689307. 3  
92090689308. 4

**Question Number : 27 Question Id : 92090622597 Question Type : MCQ Option Shuffling : No Is Question Mandatory : No Calculator : None Response Time : N.A Think Time : N.A Minimum Instruction Time : 0**

**Correct Marks : 4 Wrong Marks : 1**

निम्नलिखित में से कौन 'इंग्लिश चैनल' को दो बार पार करने वाला प्रथम भारतीय है?

- (1) आरती साहा (2) मिहिर सेन  
(3) बुला चौधरी (4) प्रिथी श्रीनिवासन

**Options :**

92090689305. 1  
92090689306. 2  
92090689307. 3  
92090689308. 4

**Question Number : 28 Question Id : 92090622598 Question Type : MCQ Option Shuffling : No Is  
Question Mandatory : No Calculator : None Response Time : N.A Think Time : N.A Minimum  
Instruction Time : 0**

**Correct Marks : 4 Wrong Marks : 1**

Match List I with List II :

List I (Books)	List II (Authors)
(A) Wings of Fire	(I) Annie Besant
(B) Wake up India	(II) A.P.J. Abdul Kalam
(C) Train to Pakistan	(III) Chetan Bhagat
(D) The three mistakes in my life	(IV) Khushwant Singh

Choose the correct answer from the options given below :

- (1) (A)-(IV), (B)-(III), (C)-(II), (D)-(I)
- (2) (A)-(II), (B)-(I), (C)-(III), (D)-(IV)
- (3) (A)-(I), (B)-(II), (C)-(IV), (D)-(III)
- (4) (A)-(II), (B)-(I), (C)-(IV), (D)-(III)

**Options :**

92090689309. 1

92090689310. 2

92090689311. 3

92090689312. 4

**Question Number : 28 Question Id : 92090622598 Question Type : MCQ Option Shuffling : No Is  
Question Mandatory : No Calculator : None Response Time : N.A Think Time : N.A Minimum  
Instruction Time : 0**

**Correct Marks : 4 Wrong Marks : 1**

सूची I के साथ सूची II का मिलान कीजिए

सूची-I	सूची -II
(A) 'विंग्स ऑफ फायर'	(I) एनी बिसन्ट
(B) 'वेक अप इंडिया'	(II) ए.पी.जे. अब्दुल कलाम
(C) 'ट्रेन टू पाकिस्तान'	(III) चेतन भगत
(D) 'द थ्री मिस्टेक्स इन माई लाइफ़'	(IV) खुशवंत सिंह

नीचे दिए गए विकल्पों में से सही उत्तर का चयन कीजिए:

- (1) (A)-(IV), (B)-(III), (C)-(II), (D)-(I)
- (2) (A)-(II), (B)-(I), (C)-(III), (D)-(IV)
- (3) (A)-(I), (B)-(II), (C)-(IV), (D)-(III)
- (4) (A)-(II), (B)-(I), (C)-(IV), (D)-(III)

**Options :**

92090689309. 1
92090689310. 2
92090689311. 3
92090689312. 4

**Question Number : 29 Question Id : 92090622599 Question Type : MCQ Option Shuffling : No Is Question Mandatory : No Calculator : None Response Time : N.A Think Time : N.A Minimum Instruction Time : 0**

**Correct Marks : 4 Wrong Marks : 1**

The first recipient of Jnanpith award is:

- (1) G. Shankar Kurup
- (2) Damoder Mauzo
- (3) Nilmani Phookan
- (4) Krishna Sobti

**Options :**

92090689313. 1
92090689314. 2
92090689315. 3
92090689316. 4

**Question Number : 29 Question Id : 92090622599 Question Type : MCQ Option Shuffling : No Is Question Mandatory : No Calculator : None Response Time : N.A Think Time : N.A Minimum Instruction Time : 0**

**Correct Marks : 4 Wrong Marks : 1**

ज्ञानपीठ पुरस्कार सर्वप्रथम किसे दिया गया था?

- |                    |                  |
|--------------------|------------------|
| (1) जी. शंकर कुरूप | (2) दामोदर मन्टो |
| (3) नीलमणि फूकन    | (4) कृष्णा सोबती |

**Options :**

92090689313. 1  
92090689314. 2  
92090689315. 3  
92090689316. 4

**Question Number : 30 Question Id : 92090622600 Question Type : MCQ Option Shuffling : No Is Question Mandatory : No Calculator : None Response Time : N.A Think Time : N.A Minimum Instruction Time : 0**

**Correct Marks : 4 Wrong Marks : 1**

The G20 or Group of 20 is an inter governmental forum comprising 19 countries and European Union. It works mainly to address \_\_\_\_\_ .

- (1) International financial stability
- (2) Terrorism and territorial disputes
- (3) Peace Prosperity and stability
- (4) Common interests and to cooperate on international forums

**Options :**

92090689317. 1  
92090689318. 2  
92090689319. 3  
92090689320. 4

**Question Number : 30 Question Id : 92090622600 Question Type : MCQ Option Shuffling : No Is Question Mandatory : No Calculator : None Response Time : N.A Think Time : N.A Minimum Instruction Time : 0**

**Correct Marks : 4 Wrong Marks : 1**

जी-20 या ग्रुप ऑफ 20 एक अंतर-सरकारी मंच है, जिसमें 19 देश और यूरोपियन यूनियन सम्मिलित है। यह मुख्यतः किस पर ध्यान देता है?

- (1) अंतर्राष्ट्रीय वित्तीय स्थायित्व
- (2) आतंकवाद और राज्य – क्षेत्रीय विवाद (टेरिटोरियल डिसप्यूट्स)
- (3) शांति, समृद्धि और स्थायित्व
- (4) सामान्य हित और अंतर्राष्ट्रीय मंचों पर सहयोग

**Options :**

92090689317. 1  
92090689318. 2  
92090689319. 3  
92090689320. 4

**Question Number : 31 Question Id : 92090622601 Question Type : MCQ Option Shuffling : No Is Question Mandatory : No Calculator : None Response Time : N.A Think Time : N.A Minimum Instruction Time : 0**

**Correct Marks : 4 Wrong Marks : 1**

According to 2011 census, the only Indian state that had decline in population compared to 2001 census is:

- |              |             |
|--------------|-------------|
| (1) Nagaland | (2) Manipur |
| (3) Kerala   | (4) Sikkim  |

**Options :**

92090689321. 1  
92090689322. 2  
92090689323. 3  
92090689324. 4

**Question Number : 31 Question Id : 92090622601 Question Type : MCQ Option Shuffling : No Is Question Mandatory : No Calculator : None Response Time : N.A Think Time : N.A Minimum Instruction Time : 0**

**Correct Marks : 4 Wrong Marks : 1**

2011 की जनगणना के अनुसार भारत का वह एकमात्र राज्य कौनसा है, जिसमें 2001 की जनगणना की तुलना में जनसंख्या में गिरावट आई है?

- |             |             |
|-------------|-------------|
| (1) नगालैंड | (2) मणिपुर  |
| (3) केरल    | (4) सिक्किम |

**Options :**

92090689321. 1  
92090689322. 2  
92090689323. 3  
92090689324. 4

**Question Number : 32 Question Id : 92090622602 Question Type : MCQ Option Shuffling : No Is Question Mandatory : No Calculator : None Response Time : N.A Think Time : N.A Minimum Instruction Time : 0**

**Correct Marks : 4 Wrong Marks : 1**

The only gland in the human body that can regenerate it self if part of it is removed is called:

- |             |              |
|-------------|--------------|
| (1) Adrenal | (2) Thyroid  |
| (3) Liver   | (4) Pancreas |

**Options :**

92090689325. 1  
92090689326. 2  
92090689327. 3  
92090689328. 4

**Question Number : 32 Question Id : 92090622602 Question Type : MCQ Option Shuffling : No Is Question Mandatory : No Calculator : None Response Time : N.A Think Time : N.A Minimum Instruction Time : 0**

**Correct Marks : 4 Wrong Marks : 1**

मानव शरीर में उस एकमात्र ग्रन्थि को क्या कहा जाता है, जिसके एक भाग को हटाने पर वह अपने को पुनर्जीवित (पुनः उत्पन्न होना) कर सकती है?

- |                        |                           |
|------------------------|---------------------------|
| (1) अधिवृक्क (एड्रिनल) | (2) अवटूग्रन्थि (थाइरॉयड) |
| (3) यकृत (लीवर)        | (4) अग्राशय (पैन्क्रियाज) |

**Options :**

92090689325. 1  
92090689326. 2  
92090689327. 3  
92090689328. 4

**Question Number : 33 Question Id : 92090622603 Question Type : MCQ Option Shuffling : No Is Question Mandatory : No Calculator : None Response Time : N.A Think Time : N.A Minimum Instruction Time : 0**

**Correct Marks : 4 Wrong Marks : 1**

Wilted flower revive in fresh water, plants can absorb water from the soil. These are examples of which phenomenon:

- |                     |                      |
|---------------------|----------------------|
| (1) Surface Tension | (2) Capillary action |
| (3) Viscosity       | (4) Osmosis          |

**Options :**

- 92090689329. 1
- 92090689330. 2
- 92090689331. 3
- 92090689332. 4

**Question Number : 33 Question Id : 92090622603 Question Type : MCQ Option Shuffling : No Is Question Mandatory : No Calculator : None Response Time : N.A Think Time : N.A Minimum Instruction Time : 0**

**Correct Marks : 4 Wrong Marks : 1**

मुरझाए फूल ताजा जल में पुनर्जीवित होते हैं, पादप मृदा से जल सोख सकते हैं। ये किस परिघटना के उदाहरण हैं ?

- |                                 |                      |
|---------------------------------|----------------------|
| (1) पृष्ठ – तनाव (सर्फेस टेंशन) | (2) केशिका क्रिया    |
| (3) श्यानता (विस्कोसिटी)        | (4) परासरण (ओसमोसिस) |

**Options :**

- 92090689329. 1
- 92090689330. 2
- 92090689331. 3
- 92090689332. 4

**Question Number : 34 Question Id : 92090622604 Question Type : MCQ Option Shuffling : No Is Question Mandatory : No Calculator : None Response Time : N.A Think Time : N.A Minimum Instruction Time : 0**

**Correct Marks : 4 Wrong Marks : 1**

Match List I with List II :

List I	List II
(A) World's first space station	(I) Pioneer 10
(B) First Satellite launched by America.	(II) Salyut 1
(C) First spacecraft to fly-past mars	(III) Explorer 1
(D) First spacecraft to fly-past Jupiter	(IV) Mariner 4

Choose the correct answer from the options given below :

- (1) (A)-(II), (B)-(III), (C)-(IV), (D)-(I)
- (2) (A)-(III), (B)-(II), (C)-(IV), (D)-(I)
- (3) (A)-(II), (B)-(III), (C)-(I), (D)-(IV)
- (4) (A)-(IV), (B)-(III), (C)-(II), (D)-(I)

**Options :**

- 92090689333. 1
- 92090689334. 2
- 92090689335. 3
- 92090689336. 4

**Question Number : 34 Question Id : 92090622604 Question Type : MCQ Option Shuffling : No Is Question Mandatory : No Calculator : None Response Time : N.A Think Time : N.A Minimum Instruction Time : 0**

**Correct Marks : 4 Wrong Marks : 1**



सूची I के साथ सूची II का मिलान कीजिए

सूची-I	सूची -II
(A) विश्व का प्रथम अंतरिक्ष स्टेशन	(I) पायोनियर 10
(B) अमेरिका द्वारा प्रक्षेपित उपग्रह	(II) सैल्यूट 1
(C) मंगल ग्रह की ओर उड़ान भरने वाला प्रथम अंतरिक्ष यान	(III) एक्सप्लोरर 1
(D) उड़ान भरने वाला प्रथम अंतरिक्ष यान	(IV) मैरिनर 4

नीचे दिए गए विकल्पों में से सही उत्तर का चयन कीजिए:

- (1) (A)-(II), (B)-(III), (C)-(IV), (D)-(I)
- (2) (A)-(III), (B)-(II), (C)-(IV), (D)-(I)
- (3) (A)-(II), (B)-(III), (C)-(I), (D)-(IV)
- (4) (A)-(IV), (B)-(III), (C)-(II), (D)-(I)

**Options :**

92090689333. 1  
92090689334. 2  
92090689335. 3  
92090689336. 4

**Question Number : 35 Question Id : 92090622605 Question Type : MCQ Option Shuffling : No Is Question Mandatory : No Calculator : None Response Time : N.A Think Time : N.A Minimum Instruction Time : 0**

**Correct Marks : 4 Wrong Marks : 1**

The NATO headquarters are situated on which city of Europe?

- |              |                 |
|--------------|-----------------|
| (1) London   | (2) Paris       |
| (3) Brussels | (4) Switzerland |

**Options :**

92090689337. 1  
92090689338. 2  
92090689339. 3  
92090689340. 4

**Question Number : 35 Question Id : 92090622605 Question Type : MCQ Option Shuffling : No Is Question Mandatory : No Calculator : None Response Time : N.A Think Time : N.A Minimum Instruction Time : 0**

**Correct Marks : 4 Wrong Marks : 1**

नाटो (NATO) का मुख्यालय यूरोप के किस शहर में स्थित है?

- |               |                  |
|---------------|------------------|
| (1) लंदन      | (2) पेरिस        |
| (3) ब्रुसेल्स | (4) स्विट्जरलैंड |

**Options :**

- 92090689337. 1
- 92090689338. 2
- 92090689339. 3
- 92090689340. 4

**Question Number : 36 Question Id : 92090622606 Question Type : MCQ Option Shuffling : No Is Question Mandatory : No Calculator : None Response Time : N.A Think Time : N.A Minimum Instruction Time : 0**

**Correct Marks : 4 Wrong Marks : 1**

Nephology is a branch of meteorology that deals with the study in the atmosphere.

- |                   |                |
|-------------------|----------------|
| (1) Water vapours | (2) Pollutants |
| (3) Clouds        | (4) Germs      |

**Options :**

- 92090689341. 1
- 92090689342. 2
- 92090689343. 3
- 92090689344. 4

**Question Number : 36 Question Id : 92090622606 Question Type : MCQ Option Shuffling : No Is Question Mandatory : No Calculator : None Response Time : N.A Think Time : N.A Minimum Instruction Time : 0**

**Correct Marks : 4 Wrong Marks : 1**

मेघविज्ञान मौसम-विज्ञान की एक शाखा है, जो वायुमंडल में किसके अध्ययन से सम्बंधित है?

- |             |                     |
|-------------|---------------------|
| (1) जलवाष्प | (2) प्रदूषक         |
| (3) मेघ     | (4) जीवाणु (जर्म्स) |

**Options :**

- 92090689341. 1
- 92090689342. 2
- 92090689343. 3
- 92090689344. 4

**Question Number : 37 Question Id : 92090622607 Question Type : MCQ Option Shuffling : No Is Question Mandatory : No Calculator : None Response Time : N.A Think Time : N.A Minimum Instruction Time : 0**

**Correct Marks : 4 Wrong Marks : 1**

Match List I with List II :

List I	List II
(A) Vishakhapatnam Port	(I) Is a natural harbour situated at the head of queen of Arabian sea
(B) Paradwip Port	(II) Is a land locked harbour
(C) Kandla Port	(III) Has deepest harbour and is situated in Mahanadi delta
(D) Kochchi Port	(IV) Situated at the head of Gulf of Kuchchh

Choose the correct answer from the options given below :

- (1) (A)-(IV), (B)-(I), (C)-(II), (D)-(III)
- (2) (A)-(III), (B)-(II), (C)-(IV), (D)-(I)
- (3) (A)-(II), (B)-(III), (C)-(IV), (D)-(I)
- (4) (A)-(II), (B)-(III), (C)-(I), (D)-(IV)

**Options :**

- 92090689345. 1
- 92090689346. 2
- 92090689347. 3
- 92090689348. 4

**Question Number : 37 Question Id : 92090622607 Question Type : MCQ Option Shuffling : No Is Question Mandatory : No Calculator : None Response Time : N.A Think Time : N.A Minimum Instruction Time : 0**

**Correct Marks : 4 Wrong Marks : 1**

सूची I के साथ सूची II का मिलान कीजिए

सूची-I	सूची -II
(A) विशाखापट्टनम	(I) एक प्राकृतिक पोताश्रय है, जो अरब सागर की क्वीन के शीर्ष पर स्थित है।
(B) पाराद्वीप बंदरगाह	(II) एक भू-आबद्ध पोताश्रय है।
(C) कांडला बंदरगाह	(III) अधिकतम गहरा पोताश्रय है और महानदी डेल्टा में स्थित है।
(D) कोच्चिन बंदरगाह	(IV) कच्छ की खाड़ी के शीर्ष पर स्थित है।

नीचे दिए गए विकल्पों में से सही उत्तर का चयन कीजिए:

- (1) (A)-(IV), (B)-(I), (C)-(II), (D)-(III)
- (2) (A)-(III), (B)-(II), (C)-(IV), (D)-(I)
- (3) (A)-(II), (B)-(III), (C)-(IV), (D)-(I)
- (4) (A)-(II), (B)-(III), (C)-(I), (D)-(IV)

**Options :**

92090689345. 1
92090689346. 2
92090689347. 3
92090689348. 4

**Question Number : 38 Question Id : 92090622608 Question Type : MCQ Option Shuffling : No Is Question Mandatory : No Calculator : None Response Time : N.A Think Time : N.A Minimum Instruction Time : 0**

**Correct Marks : 4 Wrong Marks : 1**

Match List I with List II :

List I	List II
(A) Speedy increase in the milk production	(I) Green Revolution
(B) Increase in oil-seeds production	(II) White Revolution
(C) Increase in the fish production	(III) Yellow Revolution
(D) Increase in agricultural production by use of technology	(IV) Blue Revolution

Choose the correct answer from the options given below :

- (1) (A)-(IV), (B)-(III), (C)-(II), (D)-(I)
- (2) (A)-(II), (B)-(III), (C)-(IV), (D)-(I)
- (3) (A)-(III), (B)-(II), (C)-(IV), (D)-(I)
- (4) (A)-(II), (B)-(III), (C)-(I), (D)-(IV)

**Options :**

92090689349. 1

92090689350. 2

92090689351. 3

92090689352. 4

**Question Number : 38 Question Id : 92090622608 Question Type : MCQ Option Shuffling : No Is Question Mandatory : No Calculator : None Response Time : N.A Think Time : N.A Minimum Instruction Time : 0**

**Correct Marks : 4 Wrong Marks : 1**

सूची I के साथ सूची II का मिलान कीजिए

सूची-I

- (A) दुग्ध उत्पादन में तेजी से वृद्धि
- (B) तिलहन उत्पादन में वृद्धि
- (C) मछली उत्पादन में वृद्धि
- (D) प्रौद्योगिकी के उपयोग द्वारा कृषि - पैदावार में वृद्धि

सूची -II

- (I) हरित क्रांति
- (II) श्वेत क्रांति
- (III) पीत क्रांति
- (IV) नीली क्रांति

नीचे दिए गए विकल्पों में से सही उत्तर का चयन कीजिए:

- (1) (A)-(IV), (B)-(III), (C)-(II), (D)-(I)
- (2) (A)-(II), (B)-(III), (C)-(IV), (D)-(I)
- (3) (A)-(III), (B)-(II), (C)-(IV), (D)-(I)
- (4) (A)-(II), (B)-(III), (C)-(I), (D)-(IV)

**Options :**

- 92090689349. 1
- 92090689350. 2
- 92090689351. 3
- 92090689352. 4

**Question Number : 39 Question Id : 92090622609 Question Type : MCQ Option Shuffling : No Is Question Mandatory : No Calculator : None Response Time : N.A Think Time : N.A Minimum Instruction Time : 0 Correct Marks : 4 Wrong Marks : 1**

Given below are two statements :

Statement I : Konkan Railway is a 760 km long rail route which connects Roha in Maharashtra to Mangalore in Karnataka.

Statement II : The state of Maharashtra, Karnataka, Gujrat and Tamil Nadu are partners in the above undertaking

In the light of the above statements, choose the correct answer from the options given below :

- (1) Both Statement I and Statement II are true
- (2) Both Statement I and Statement II are false
- (3) Statement I is true but Statement II is false
- (4) Statement I is false but Statement II is true

**Options :**

92090689353. 1

92090689354. 2

92090689355. 3

92090689356. 4

**Question Number : 39 Question Id : 92090622609 Question Type : MCQ Option Shuffling : No Is Question Mandatory : No Calculator : None Response Time : N.A Think Time : N.A Minimum Instruction Time : 0**

**Correct Marks : 4 Wrong Marks : 1**

नीचे दो कथन दिए गए हैं:

कथन I : कोंकण रेलवे 760 किलोमीटर लंबा एक मार्ग है, जो महाराष्ट्र के रोहा से लेकर कर्नाटक के मैंगलोर तक को जोड़ता है।

कथन II : उपर्युक्त उपक्रम में महाराष्ट्र, कर्नाटक, गुजरात और तमिलनाडु साझेदार हैं।

उपरोक्त कथन के आलोक में, नीचे दिए गए विकल्पों में से सही उत्तर का चयन कीजिए

- (1) कथन I और II दोनों सत्य हैं
- (2) कथन I और II दोनों असत्य हैं
- (3) कथन I सत्य है, लेकिन कथन II असत्य है
- (4) कथन I असत्य है, लेकिन कथन II सत्य है

**Options :**

92090689353. 1  
92090689354. 2  
92090689355. 3  
92090689356. 4

**Question Number : 40 Question Id : 92090622610 Question Type : MCQ Option Shuffling : No Is Question Mandatory : No Calculator : None Response Time : N.A Think Time : N.A Minimum Instruction Time : 0**

**Correct Marks : 4 Wrong Marks : 1**

The most expensive Indian painting sold in 1961 was painted by:

- (1) M.F. Hussain (2) S.H. Raja  
(3) V.S. Gaitonde (4) Raja Ravi Verma

**Options :**

92090689357. 1  
92090689358. 2  
92090689359. 3  
92090689360. 4

**Question Number : 40 Question Id : 92090622610 Question Type : MCQ Option Shuffling : No Is Question Mandatory : No Calculator : None Response Time : N.A Think Time : N.A Minimum Instruction Time : 0**

**Correct Marks : 4 Wrong Marks : 1**

1961 में बिकी भारत की सर्वाधिक महंगी पेंटिंग को किसने चित्रित किया था?

- (1) एम. एफ. हुसैन (2) एस. एच. राजा  
(3) वी. एस. गैतोंद्रे (4) राजा रवि वर्मा

**Options :**

92090689357. 1  
92090689358. 2  
92090689359. 3  
92090689360. 4

**Question Number : 41 Question Id : 92090622611 Question Type : MCQ Option Shuffling : No Is Question Mandatory : No Calculator : None Response Time : N.A Think Time : N.A Minimum Instruction Time : 0**

**Correct Marks : 4 Wrong Marks : 1**



Japan's former longest serving prime minister who was shot dead while giving a campaign speech. His name was\_\_\_\_\_.

- |                    |                  |
|--------------------|------------------|
| (1) Yoshihide Suga | (2) Fumio Kshida |
| (3) Shinzo Abe     | (4) Naruhito     |

**Options :**

92090689361. 1  
92090689362. 2  
92090689363. 3  
92090689364. 4

**Question Number : 41 Question Id : 92090622611 Question Type : MCQ Option Shuffling : No Is Question Mandatory : No Calculator : None Response Time : N.A Think Time : N.A Minimum Instruction Time : 0**

**Correct Marks : 4 Wrong Marks : 1**

जापान में सबसे लम्बे समय तक पदासीन रहे प्रधान मंत्री की तब गोली मार कर हत्या कर दी गयी, जब वह एक चुनावी अभियान में भाषण दे रहे थे। इनका क्या नाम था?

- |                   |                    |
|-------------------|--------------------|
| (1) योशिहिडे सुगा | (2) फ्यूमिओ क्षिदा |
| (3) शिन्जो अबे    | (4) नारूहितो       |

**Options :**

92090689361. 1  
92090689362. 2  
92090689363. 3  
92090689364. 4

**Question Number : 42 Question Id : 92090622612 Question Type : MCQ Option Shuffling : No Is Question Mandatory : No Calculator : None Response Time : N.A Think Time : N.A Minimum Instruction Time : 0**

**Correct Marks : 4 Wrong Marks : 1**

Who received the latest 57<sup>th</sup> Jnanpith Award in 2022.

- |                    |                   |
|--------------------|-------------------|
| (1) Krishna Sabti  | (2) Damodar Mauzo |
| (3) Mulk Raj Anand | (4) Shankar Ghosh |

**Options :**

92090689365. 1  
92090689366. 2  
92090689367. 3  
92090689368. 4

**Question Number : 42 Question Id : 92090622612 Question Type : MCQ Option Shuffling : No Is Question Mandatory : No Calculator : None Response Time : N.A Think Time : N.A Minimum Instruction Time : 0**

**Correct Marks : 4 Wrong Marks : 1**

निम्नलिखित में से किसको 2022 में नवीनतम 57 वां ज्ञानपीठ पुरस्कार प्राप्त हुआ था?

- |                    |                 |
|--------------------|-----------------|
| (1) कृष्णा सोबती   | (2) दामोदर मैजो |
| (3) मुल्क राज आनंद | (4) शंकर घोष    |

**Options :**

- 92090689365. 1
- 92090689366. 2
- 92090689367. 3
- 92090689368. 4

**Question Number : 43 Question Id : 92090622613 Question Type : MCQ Option Shuffling : No Is Question Mandatory : No Calculator : None Response Time : N.A Think Time : N.A Minimum Instruction Time : 0**

**Correct Marks : 4 Wrong Marks : 1**

India's first bullet train will connect which two cities?

- |                      |                  |
|----------------------|------------------|
| (1) Delhi-Agra       | (2) Delhi-Jaipur |
| (3) Mumbai-Ahmedabad | (4) Mumbai-Pune  |

**Options :**

- 92090689369. 1
- 92090689370. 2
- 92090689371. 3
- 92090689372. 4

**Question Number : 43 Question Id : 92090622613 Question Type : MCQ Option Shuffling : No Is Question Mandatory : No Calculator : None Response Time : N.A Think Time : N.A Minimum Instruction Time : 0**

**Correct Marks : 4 Wrong Marks : 1**

भारत की प्रथम बुलेट ट्रेन किन दो शहरों को जोड़ेगी?

- |                      |                    |
|----------------------|--------------------|
| (1) दिल्ली – आगरा    | (2) दिल्ली – जयपुर |
| (3) मुंबई – अहमदाबाद | (4) मुंबई – पुणे   |

**Options :**

92090689369. 1  
92090689370. 2  
92090689371. 3  
92090689372. 4

**Question Number : 44 Question Id : 92090622614 Question Type : MCQ Option Shuffling : No Is Question Mandatory : No Calculator : None Response Time : N.A Think Time : N.A Minimum Instruction Time : 0**

**Correct Marks : 4 Wrong Marks : 1**

'Golden Quadrilateral' is a major project taken up by NHAI. It comprises construction of long 4/6 lane high density traffic corridor which connects

- (1) New Delhi with Amritsar (Golden Temple)
- (2) Golden temple with four big cities of Punjab
- (3) India's four big metro cities of Delhi-Mumbai-Chennai-Kolkata
- (4) India's four extreme states Jammu and Kashmir, Tamilnadu, Assam and Gujarat

**Options :**

92090689373. 1  
92090689374. 2  
92090689375. 3  
92090689376. 4

**Question Number : 44 Question Id : 92090622614 Question Type : MCQ Option Shuffling : No Is Question Mandatory : No Calculator : None Response Time : N.A Think Time : N.A Minimum Instruction Time : 0**

**Correct Marks : 4 Wrong Marks : 1**

'स्वर्ण चतुर्भुज' एक प्रमुख परियोजना है, जो एन. एच. ए. आई. द्वारा प्रारम्भ की गयी। इसमें 4/6 लेन वाला उच्च घनत्व यातायात कॉरिडोर का निर्माण सम्मिलित है, जो किनको जोड़ता है?

- (1) नई दिल्ली को अमृतसर (स्वर्ण मंदिर) के साथ
- (2) स्वर्ण मंदिर को पंजाब के चार बड़े शहरों के साथ
- (3) भारत के चार बड़े मेट्रो शहरों – दिल्ली-मुंबई-चैन्नई-कोलकाता को
- (4) भारत के चार दूरस्थ राज्यों – जम्मू एवं कश्मीर, तमिलनाडु, असम और गुजरात को

**Options :**

92090689373. 1  
92090689374. 2  
92090689375. 3  
92090689376. 4

**Question Number : 45 Question Id : 92090622615 Question Type : MCQ Option Shuffling : No Is Question Mandatory : No Calculator : None Response Time : N.A Think Time : N.A Minimum Instruction Time : 0**

**Correct Marks : 4 Wrong Marks : 1**

Who is the new youngest President of Chile?

- |                       |                      |
|-----------------------|----------------------|
| (1) Jose Antanio Kast | (2) Salvador Allende |
| (3) Gabriel Boric     | (4) Olaf Scholz      |

**Options :**

- 92090689377. 1
- 92090689378. 2
- 92090689379. 3
- 92090689380. 4

**Question Number : 45 Question Id : 92090622615 Question Type : MCQ Option Shuffling : No Is Question Mandatory : No Calculator : None Response Time : N.A Think Time : N.A Minimum Instruction Time : 0**

**Correct Marks : 4 Wrong Marks : 1**

चिली के सबसे युवा नए राष्ट्रपति कौन हैं?

- |                        |                    |
|------------------------|--------------------|
| (1) जोस एंटोनियो कास्ट | (2) सल्वाडोर आलंदे |
| (3) गैब्रियल बोरिक     | (4) ओलाफ शोल्ट     |

**Options :**

- 92090689377. 1
- 92090689378. 2
- 92090689379. 3
- 92090689380. 4

**Question Number : 46 Question Id : 92090622616 Question Type : MCQ Option Shuffling : No Is Question Mandatory : No Calculator : None Response Time : N.A Think Time : N.A Minimum Instruction Time : 0**

**Correct Marks : 4 Wrong Marks : 1**

How many number of layers are in the open system interconnection (OSI) model?

- |       |       |
|-------|-------|
| (1) 5 | (2) 6 |
| (3) 8 | (4) 7 |

**Options :**

- 92090689381. 1
- 92090689382. 2
- 92090689383. 3

92090689384. 4

**Question Number : 46 Question Id : 92090622616 Question Type : MCQ Option Shuffling : No Is Question Mandatory : No Calculator : None Response Time : N.A Think Time : N.A Minimum Instruction Time : 0**

**Correct Marks : 4 Wrong Marks : 1**

ओपन सिस्टम इंटरकनेक्शन (ओ. एस. आई) मॉडल में परतें कितनी संख्या में हैं?

- |       |       |
|-------|-------|
| (1) 5 | (2) 6 |
| (3) 8 | (4) 7 |

**Options :**

- 92090689381. 1
- 92090689382. 2
- 92090689383. 3
- 92090689384. 4

**Question Number : 47 Question Id : 92090622617 Question Type : MCQ Option Shuffling : No Is Question Mandatory : No Calculator : None Response Time : N.A Think Time : N.A Minimum Instruction Time : 0**

**Correct Marks : 4 Wrong Marks : 1**

Workbook is a collection of:

- |                |             |
|----------------|-------------|
| (1) Page setup | (2) Buttons |
| (3) Worksheets | (4) Charts  |

**Options :**

- 92090689385. 1
- 92090689386. 2
- 92090689387. 3
- 92090689388. 4

**Question Number : 47 Question Id : 92090622617 Question Type : MCQ Option Shuffling : No Is Question Mandatory : No Calculator : None Response Time : N.A Think Time : N.A Minimum Instruction Time : 0**

**Correct Marks : 4 Wrong Marks : 1**

वर्कबुक किनका एक संग्रह है?

- |                |             |
|----------------|-------------|
| (1) पेज सेट-अप | (2) बटन     |
| (3) वर्कशीट्स  | (4) चार्ट्स |

**Options :**

- 92090689385. 1
- 92090689386. 2
- 92090689387. 3
- 92090689388. 4

**Question Number : 48 Question Id : 92090622618 Question Type : MCQ Option Shuffling : No Is Question Mandatory : No Calculator : None Response Time : N.A Think Time : N.A Minimum Instruction Time : 0**

**Correct Marks : 4 Wrong Marks : 1**

The default file format of MS Access is:

- |          |          |
|----------|----------|
| (1) .doc | (2) .ppt |
| (3) .xls | (4) .mdb |

**Options :**

- 92090689389. 1
- 92090689390. 2
- 92090689391. 3
- 92090689392. 4

**Question Number : 48 Question Id : 92090622618 Question Type : MCQ Option Shuffling : No Is Question Mandatory : No Calculator : None Response Time : N.A Think Time : N.A Minimum Instruction Time : 0**

**Correct Marks : 4 Wrong Marks : 1**

एम. एस. एक्सेस का डिफॉल्ट फाईल फार्मेट कौनसा है?

- |          |          |
|----------|----------|
| (1) .doc | (2) .ppt |
| (3) .xls | (4) .mdb |

**Options :**

- 92090689389. 1
- 92090689390. 2
- 92090689391. 3
- 92090689392. 4

**Question Number : 49 Question Id : 92090622619 Question Type : MCQ Option Shuffling : No Is Question Mandatory : No Calculator : None Response Time : N.A Think Time : N.A Minimum Instruction Time : 0**

**Correct Marks : 4 Wrong Marks : 1**

The data-storage capacity of DVD is:

- |            |            |
|------------|------------|
| (1) 2.5 GB | (2) 700 MB |
| (3) 1.3 GB | (4) 4.7 GB |

**Options :**

- 92090689393. 1
- 92090689394. 2
- 92090689395. 3
- 92090689396. 4

**Question Number : 49 Question Id : 92090622619 Question Type : MCQ Option Shuffling : No Is Question Mandatory : No Calculator : None Response Time : N.A Think Time : N.A Minimum Instruction Time : 0**

**Correct Marks : 4 Wrong Marks : 1**

डी. वी. डी. की डेटा स्टोरेज क्षमता कितनी है?

- |            |            |
|------------|------------|
| (1) 2.5 GB | (2) 700 GB |
| (3) 13 GB  | (4) 4.7 GB |

**Options :**

- 92090689393. 1
- 92090689394. 2
- 92090689395. 3
- 92090689396. 4

**Question Number : 50 Question Id : 92090622620 Question Type : MCQ Option Shuffling : No Is Question Mandatory : No Calculator : None Response Time : N.A Think Time : N.A Minimum Instruction Time : 0**

**Correct Marks : 4 Wrong Marks : 1**

The contents written in \_\_\_\_\_ requires continuous power supply to retain it into the memory.

- |                            |                               |
|----------------------------|-------------------------------|
| (1) Read Only Memory (ROM) | (2) Random Access Drive (RAM) |
| (3) Hard Disk Drive (HDD)  | (4) Pen Drive                 |

**Options :**

- 92090689397. 1
- 92090689398. 2
- 92090689399. 3
- 92090689400. 4

**Question Number : 50 Question Id : 92090622620 Question Type : MCQ Option Shuffling : No Is Question Mandatory : No Calculator : None Response Time : N.A Think Time : N.A Minimum Instruction Time : 0**

**Correct Marks : 4 Wrong Marks : 1**

\_\_\_\_\_ में लिखित विषयवस्तु को बनाए रखने के लिए निरंतर बिजली आपूर्ति आवश्यक है।

- |                              |                               |
|------------------------------|-------------------------------|
| (1) रीड ओनली मेमोरी (ROM)    | (2) रेंडम एक्सेस मेमोरी (RAM) |
| (3) हार्ड डिस्क ड्राइव (HDD) | (4) पेनड्राइव (Pen Drive)     |

**Options :**

- 92090689397. 1
- 92090689398. 2
- 92090689399. 3
- 92090689400. 4

**Question Number : 51 Question Id : 92090622621 Question Type : MCQ Option Shuffling : No Is Question Mandatory : No Calculator : None Response Time : N.A Think Time : N.A Minimum Instruction Time : 0**

**Correct Marks : 4 Wrong Marks : 1**

The shortcut key used to close a tab is:

- |            |            |
|------------|------------|
| (1) Ctrl+q | (2) Ctrl+k |
| (3) Ctrl+w | (4) Ctrl+r |

**Options :**

- 92090689401. 1
- 92090689402. 2
- 92090689403. 3
- 92090689404. 4

**Question Number : 51 Question Id : 92090622621 Question Type : MCQ Option Shuffling : No Is Question Mandatory : No Calculator : None Response Time : N.A Think Time : N.A Minimum Instruction Time : 0**

**Correct Marks : 4 Wrong Marks : 1**

किसी टेब को क्लोज करने में प्रयोग की जाने वाली कौनसी शॉर्ट-कट की है?

- |            |            |
|------------|------------|
| (1) Ctrl+q | (2) Ctrl+k |
| (3) Ctrl+w | (4) Ctrl+r |

**Options :**

- 92090689401. 1
- 92090689402. 2



92090689403. 3

92090689404. 4

**Question Number : 52 Question Id : 92090622622 Question Type : MCQ Option Shuffling : No Is Question Mandatory : No Calculator : None Response Time : N.A Think Time : N.A Minimum Instruction Time : 0**

**Correct Marks : 4 Wrong Marks : 1**

Which one of the following parameters is used to measure the performance of super computer?

- |           |          |
|-----------|----------|
| (1) GHz   | (2) MIPS |
| (3) FLOPS | (4) Hz   |

**Options :**

92090689405. 1

92090689406. 2

92090689407. 3

92090689408. 4

**Question Number : 52 Question Id : 92090622622 Question Type : MCQ Option Shuffling : No Is Question Mandatory : No Calculator : None Response Time : N.A Think Time : N.A Minimum Instruction Time : 0**

**Correct Marks : 4 Wrong Marks : 1**

सुपर कम्प्यूटर के निष्पादन को मापने के लिए निम्नलिखित में से किस मानदंड को प्रयोग किया जाता है?

- |           |          |
|-----------|----------|
| (1) GHz   | (2) MIPS |
| (3) FLOPS | (4) Hz   |

**Options :**

92090689405. 1

92090689406. 2

92090689407. 3

92090689408. 4

**Question Number : 53 Question Id : 92090622623 Question Type : MCQ Option Shuffling : No Is Question Mandatory : No Calculator : None Response Time : N.A Think Time : N.A Minimum Instruction Time : 0**

**Correct Marks : 4 Wrong Marks : 1**

Webpages that are linked to form a website share a\_\_\_\_\_.

- |                            |                           |
|----------------------------|---------------------------|
| (1) Uniform Domain Address | (2) Unique Domain Address |
| (3) Uniform Domain Name    | (4) Unique Domain Name    |

**Options :**

- 92090689409. 1
- 92090689410. 2
- 92090689411. 3
- 92090689412. 4

**Question Number : 53 Question Id : 92090622623 Question Type : MCQ Option Shuffling : No Is Question Mandatory : No Calculator : None Response Time : N.A Think Time : N.A Minimum Instruction Time : 0**

**Correct Marks : 4 Wrong Marks : 1**

एक वेबसाइट के निर्माण के लिए जिन वेबपेजेज़ को अतःस्थापित किया जाता है, वे क्या साझा करते हैं?

- |                            |                        |
|----------------------------|------------------------|
| (1) यूनिफॉर्म डोमेन एड्रेस | (2) यूनिक डोमेन एड्रेस |
| (3) यूनिफॉर्म डोमेन नेम    | (4) यूनिक डोमेन नेम    |

**Options :**

- 92090689409. 1
- 92090689410. 2
- 92090689411. 3
- 92090689412. 4

**Question Number : 54 Question Id : 92090622624 Question Type : MCQ Option Shuffling : No Is Question Mandatory : No Calculator : None Response Time : N.A Think Time : N.A Minimum Instruction Time : 0**

**Correct Marks : 4 Wrong Marks : 1**

MS Word provider the functionality of correction in grammer and spelling of words. This functionality is known as:

- |                 |                    |
|-----------------|--------------------|
| (1) Grammerly   | (2) Auto Correct   |
| (3) Spell Check | (4) High Fineation |

**Options :**

- 92090689413. 1
- 92090689414. 2
- 92090689415. 3
- 92090689416. 4

**Question Number : 54 Question Id : 92090622624 Question Type : MCQ Option Shuffling : No Is Question Mandatory : No Calculator : None Response Time : N.A Think Time : N.A Minimum Instruction Time : 0**

**Correct Marks : 4 Wrong Marks : 1**

एम. एस. वर्ड व्याकरण और वर्तनी में सुधार की कार्यात्मकता प्रदान करता है। इस कार्यात्मकता को किस नाम से जाना जाता है?

- |               |                   |
|---------------|-------------------|
| (1) ग्रामरली  | (2) ऑटो करेक्ट    |
| (3) स्पेल चेक | (4) हाई फ़ाइनिएशन |

**Options :**

- 92090689413. 1
- 92090689414. 2
- 92090689415. 3
- 92090689416. 4

**Question Number : 55 Question Id : 92090622625 Question Type : MCQ Option Shuffling : No Is Question Mandatory : No Calculator : None Response Time : N.A Think Time : N.A Minimum Instruction Time : 0**

**Correct Marks : 4 Wrong Marks : 1**

Software that manages and coordinates the entire activities of a computer system is known as:

- |                      |                      |
|----------------------|----------------------|
| (1) Utility Software | (2) Operating system |
| (3) System Software  | (4) Device driver    |

**Options :**

- 92090689417. 1
- 92090689418. 2
- 92090689419. 3
- 92090689420. 4

**Question Number : 55 Question Id : 92090622625 Question Type : MCQ Option Shuffling : No Is Question Mandatory : No Calculator : None Response Time : N.A Think Time : N.A Minimum Instruction Time : 0**

**Correct Marks : 4 Wrong Marks : 1**

एक कम्प्यूटर के संपूर्ण कार्यकलापों का प्रबंधन और समन्वयन करने वाले सॉफ्टवेयर को किस नाम से जाना जाता है?

- |                        |                     |
|------------------------|---------------------|
| (1) यूटिलिटी सॉफ्टवेयर | (2) ऑपरेटिंग सिस्टम |
| (3) सिस्टम सॉफ्टवेयर   | (4) डिवाइस ड्राइवर  |

**Options :**

92090689417. 1  
92090689418. 2  
92090689419. 3  
92090689420. 4

**Question Number : 56 Question Id : 92090622626 Question Type : MCQ Option Shuffling : No Is Question Mandatory : No Calculator : None Response Time : N.A Think Time : N.A Minimum Instruction Time : 0**

**Correct Marks : 4 Wrong Marks : 1**

At what time between 9'o clock and 10'o clock will the hour hand and the minute hand of a clock be in the same straight line but not together?

- |                                 |                                 |
|---------------------------------|---------------------------------|
| (1) 9:15 o'clock                | (2) 9:16 o'clock                |
| (3) $9:16 \frac{4}{11}$ o'clock | (4) $9:16 \frac{9}{11}$ o'clock |

**Options :**

92090689421. 1  
92090689422. 2  
92090689423. 3  
92090689424. 4

**Question Number : 56 Question Id : 92090622626 Question Type : MCQ Option Shuffling : No Is Question Mandatory : No Calculator : None Response Time : N.A Think Time : N.A Minimum Instruction Time : 0**

**Correct Marks : 4 Wrong Marks : 1**

9 बजे और 10 बजे के बीच किस समय घड़ी की घंटे की सुई तथा मिनट की सुई एक सरल रेखा में होंगी परन्तु एक साथ नहीं?

- |                             |                             |
|-----------------------------|-----------------------------|
| (1) 9:15 बजे                | (2) 9:16 बजे                |
| (3) $9:16 \frac{4}{11}$ बजे | (4) $9:16 \frac{9}{11}$ बजे |

**Options :**

92090689421. 1

92090689422. 2

92090689423. 3

92090689424. 4

**Question Number : 57 Question Id : 92090622627 Question Type : MCQ Option Shuffling : No Is Question Mandatory : No Calculator : None Response Time : N.A Think Time : N.A Minimum Instruction Time : 0**

**Correct Marks : 4 Wrong Marks : 1**

What day of the week was on April 15, 1954?

(1) Wednesday

(2) Thursday

(3) Friday

(4) Sunday

**Options :**

92090689425. 1

92090689426. 2

92090689427. 3

92090689428. 4

**Question Number : 57 Question Id : 92090622627 Question Type : MCQ Option Shuffling : No Is Question Mandatory : No Calculator : None Response Time : N.A Think Time : N.A Minimum Instruction Time : 0**

**Correct Marks : 4 Wrong Marks : 1**

अप्रैल 15, 1954 को सप्ताह का कौन सा दिन था?

(1) बुधवार

(2) बृहस्पतिवार

(3) शुक्रवार

(4) रविवार

**Options :**

92090689425. 1

92090689426. 2

92090689427. 3

92090689428. 4

**Question Number : 58 Question Id : 92090622628 Question Type : MCQ Option Shuffling : No Is Question Mandatory : No Calculator : None Response Time : N.A Think Time : N.A Minimum Instruction Time : 0**

**Correct Marks : 4 Wrong Marks : 1**

The average of nine consecutive natural numbers is 25. Find the smallest number.

- (1) 20 (2) 21  
(3) 22 (4) 24

**Options :**

92090689429. 1  
92090689430. 2  
92090689431. 3  
92090689432. 4

**Question Number : 58 Question Id : 92090622628 Question Type : MCQ Option Shuffling : No Is Question Mandatory : No Calculator : None Response Time : N.A Think Time : N.A Minimum Instruction Time : 0**

**Correct Marks : 4 Wrong Marks : 1**

9 क्रमागत प्राकृत संख्याओं का औसत 25 है | सबसे छोटी संख्या ज्ञात कीजिए |

- (1) 20 (2) 21  
(3) 22 (4) 24

**Options :**

92090689429. 1  
92090689430. 2  
92090689431. 3  
92090689432. 4

**Question Number : 59 Question Id : 92090622629 Question Type : MCQ Option Shuffling : No Is Question Mandatory : No Calculator : None Response Time : N.A Think Time : N.A Minimum Instruction Time : 0**

**Correct Marks : 4 Wrong Marks : 1**

Simplify  $\frac{\frac{3}{4} + \frac{1}{5} - \frac{1}{10} - 1}{\frac{1}{8} + \frac{1}{2} - \frac{3}{4}}$

- (1)  $\frac{1}{16}$  (2)  $\frac{6}{5}$   
(3) 12 (4)  $\frac{3}{20}$

**Options :**

92090689433. 1  
92090689434. 2  
92090689435. 3  
92090689436. 4

**Question Number : 59 Question Id : 92090622629 Question Type : MCQ Option Shuffling : No Is Question Mandatory : No Calculator : None Response Time : N.A Think Time : N.A Minimum Instruction Time : 0**

**Correct Marks : 4 Wrong Marks : 1**

सरल करें  $\frac{\frac{3}{4} + \frac{1}{5} - \frac{1}{10} - 1}{\frac{1}{8} + \frac{1}{2} - \frac{3}{4}}$

(1)  $\frac{1}{16}$

(2)  $\frac{6}{5}$

(3) 12

(4)  $\frac{3}{20}$

**Options :**

92090689433. 1  
92090689434. 2  
92090689435. 3  
92090689436. 4

**Question Number : 60 Question Id : 92090622630 Question Type : MCQ Option Shuffling : No Is Question Mandatory : No Calculator : None Response Time : N.A Think Time : N.A Minimum Instruction Time : 0**

**Correct Marks : 4 Wrong Marks : 1**

B is three times as old as A. After 5 years the ratio in the ages of A and B will be 1 : 2. After how many years from now will the ratio in the ages of A and B become 2 : 3 ?

(1) 16

(2) 15

(3) 13

(4) 12

**Options :**

92090689437. 1  
92090689438. 2  
92090689439. 3  
92090689440. 4

**Question Number : 60 Question Id : 92090622630 Question Type : MCQ Option Shuffling : No Is Question Mandatory : No Calculator : None Response Time : N.A Think Time : N.A Minimum Instruction Time : 0**

**Correct Marks : 4 Wrong Marks : 1**

B, A से तीन गुना बड़ा है | 5 वर्ष पश्चात, A तथा B की आयु में अनुपात 1:2 होगा | अब से कितने वर्ष पश्चात A तथा B की आयु में अनुपात 2:3 हो जाएगा?

- |        |        |
|--------|--------|
| (1) 16 | (2) 15 |
| (3) 13 | (4) 12 |

**Options :**

- 92090689437. 1
- 92090689438. 2
- 92090689439. 3
- 92090689440. 4

**Question Number : 61 Question Id : 92090622631 Question Type : MCQ Option Shuffling : No Is Question Mandatory : No Calculator : None Response Time : N.A Think Time : N.A Minimum Instruction Time : 0**

**Correct Marks : 4 Wrong Marks : 1**

The product of two numbers is 4840. If the first number is two fifth of the second number, then what is the first number?

- |         |         |
|---------|---------|
| (1) 110 | (2) 38  |
| (3) 44  | (4) 154 |

**Options :**

- 92090689441. 1
- 92090689442. 2
- 92090689443. 3
- 92090689444. 4

**Question Number : 61 Question Id : 92090622631 Question Type : MCQ Option Shuffling : No Is Question Mandatory : No Calculator : None Response Time : N.A Think Time : N.A Minimum Instruction Time : 0**

**Correct Marks : 4 Wrong Marks : 1**

दो संख्याओं का गुणन 4840 है | यदि पहली संख्या दूसरी संख्या का  $\frac{2}{5}$  भाग है तो पहली संख्या क्या है?

- |         |         |
|---------|---------|
| (1) 110 | (2) 38  |
| (3) 44  | (4) 154 |

**Options :**



92090689441. 1  
92090689442. 2  
92090689443. 3  
92090689444. 4

**Question Number : 62 Question Id : 92090622632 Question Type : MCQ Option Shuffling : No Is Question Mandatory : No Calculator : None Response Time : N.A Think Time : N.A Minimum Instruction Time : 0**

**Correct Marks : 4 Wrong Marks : 1**

In what time will a 640m long train cross an electric pole if its speed is 96km/h?

- (1) 24 sec (2) 54 sec  
(3) 5.4 sec (4) 12.5 sec

**Options :**

92090689445. 1  
92090689446. 2  
92090689447. 3  
92090689448. 4

**Question Number : 62 Question Id : 92090622632 Question Type : MCQ Option Shuffling : No Is Question Mandatory : No Calculator : None Response Time : N.A Think Time : N.A Minimum Instruction Time : 0**

**Correct Marks : 4 Wrong Marks : 1**

640 m लम्बी ट्रेन, 96 km/h की गति से चलते हुए बिजली के एक खम्भे को कितने समय में पार कर लेगी?

- (1) 24 sec (2) 54 sec  
(3) 5.4 sec (4) 12.5 sec

**Options :**

92090689445. 1  
92090689446. 2  
92090689447. 3  
92090689448. 4

**Question Number : 63 Question Id : 92090622633 Question Type : MCQ Option Shuffling : No Is Question Mandatory : No Calculator : None Response Time : N.A Think Time : N.A Minimum Instruction Time : 0**

**Correct Marks : 4 Wrong Marks : 1**

The sum of two numbers is 40 and their HCF is 8. How many pairs of numbers satisfy both the conditions?

- (1) 1 (2) 2  
(3) 3 (4) 4

**Options :**

92090689449. 1  
92090689450. 2  
92090689451. 3  
92090689452. 4

**Question Number : 63 Question Id : 92090622633 Question Type : MCQ Option Shuffling : No Is Question Mandatory : No Calculator : None Response Time : N.A Think Time : N.A Minimum Instruction Time : 0**

**Correct Marks : 4 Wrong Marks : 1**

दो संख्याओं का योग 40 है तथा उनका HCF 8 है | ऐसे कितने संख्या युग्म हैं जो दिए हुए दोनों प्रतिबंधों को संतुष्ट करते हैं ?

- (1) 1 (2) 2  
(3) 3 (4) 4

**Options :**

92090689449. 1  
92090689450. 2  
92090689451. 3  
92090689452. 4

**Question Number : 64 Question Id : 92090622634 Question Type : MCQ Option Shuffling : No Is Question Mandatory : No Calculator : None Response Time : N.A Think Time : N.A Minimum Instruction Time : 0**

**Correct Marks : 4 Wrong Marks : 1**

Two numbers are 26% and 40% respectively of a third number what percentage is the first number of the second number?

- (1) 60% (2) 65%  
(3) 66% (4) 68%

**Options :**

92090689453. 1  
92090689454. 2  
92090689455. 3

92090689456. 4

**Question Number : 64 Question Id : 92090622634 Question Type : MCQ Option Shuffling : No Is Question Mandatory : No Calculator : None Response Time : N.A Think Time : N.A Minimum Instruction Time : 0**

**Correct Marks : 4 Wrong Marks : 1**

दो संख्याएं, तीसरी संख्या की क्रमशः 26% तथा 40% हैं | पहली संख्या दूसरी संख्या की कितने प्रतिशत है ?

- |         |         |
|---------|---------|
| (1) 60% | (2) 65% |
| (3) 66% | (4) 68% |

**Options :**

- 92090689453. 1
- 92090689454. 2
- 92090689455. 3
- 92090689456. 4

**Question Number : 65 Question Id : 92090622635 Question Type : MCQ Option Shuffling : No Is Question Mandatory : No Calculator : None Response Time : N.A Think Time : N.A Minimum Instruction Time : 0**

**Correct Marks : 4 Wrong Marks : 1**

A trader sold an article at a gain of 20% Had he purchased it for 40% more and sold for ₹ 24 less, he would have incurred a loss of 20%. What is the cost price of the article?

- |           |           |
|-----------|-----------|
| (1) ₹ 150 | (2) ₹ 300 |
| (3) ₹ 450 | (4) ₹ 600 |

**Options :**

- 92090689457. 1
- 92090689458. 2
- 92090689459. 3
- 92090689460. 4

**Question Number : 65 Question Id : 92090622635 Question Type : MCQ Option Shuffling : No Is Question Mandatory : No Calculator : None Response Time : N.A Think Time : N.A Minimum Instruction Time : 0**

**Correct Marks : 4 Wrong Marks : 1**

एक व्यापारी ने एक वस्तु 20% लाभ पर बेची। यदि उसने उसे 40% अधिक पर खरीदा होता और ₹24 कम पर बेचा होता तो उसे 20% हानि हुई होती। उस वस्तु का क्रय मूल्य क्या है?

- (1) ₹ 150 (2) ₹ 300  
(3) ₹ 450 (4) ₹ 600

**Options :**

92090689457. 1  
92090689458. 2  
92090689459. 3  
92090689460. 4

**Question Number : 66 Question Id : 92090622636 Question Type : MCQ Option Shuffling : No Is Question Mandatory : No Calculator : None Response Time : N.A Think Time : N.A Minimum Instruction Time : 0**

**Correct Marks : 4 Wrong Marks : 1**

Akhilesh and Javed started a business by investing ₹ 50,000 and ₹ 60,000 respectively. Akhilesh being an active partner receives 12.5% of the profit in addition to his share of profit. How much Akhilesh gets out of a profit of ₹ 8800?

- (1) ₹ 4,600 (2) ₹ 4,500  
(3) ₹ 4,000 (4) ₹ 5,100

**Options :**

92090689461. 1  
92090689462. 2  
92090689463. 3  
92090689464. 4

**Question Number : 66 Question Id : 92090622636 Question Type : MCQ Option Shuffling : No Is Question Mandatory : No Calculator : None Response Time : N.A Think Time : N.A Minimum Instruction Time : 0**

**Correct Marks : 4 Wrong Marks : 1**

अखिलेश तथा जावेद ने क्रमशः ₹50,000 तथा ₹60,000 के निवेश के साथ व्यापार शुरू किया। अखिलेश सक्रिय साझेदार होने के कारण लाभ में अपने हिस्से के साथ कुल लाभ का 12.5% अतिरिक्त भी पाता है। ₹8,800 के लाभ में अखिलेश कितना प्राप्त करता है?

- (1) ₹ 4600 (2) ₹ 4500  
(3) ₹ 4000 (4) ₹ 5100

**Options :**

92090689461. 1

92090689462. 2

92090689463. 3

92090689464. 4

**Question Number : 67 Question Id : 92090622637 Question Type : MCQ Option Shuffling : No Is Question Mandatory : No Calculator : None Response Time : N.A Think Time : N.A Minimum Instruction Time : 0**

**Correct Marks : 4 Wrong Marks : 1**

A certain sum of money on simple interest amounts to ₹ 1,278 in 3 years and to ₹ 1,593 in  $5\frac{1}{2}$  years. Find the rate of interest per annum.

(1) 13%

(2) 14%

(3) 15.5%

(4) 16%

**Options :**

92090689465. 1

92090689466. 2

92090689467. 3

92090689468. 4

**Question Number : 67 Question Id : 92090622637 Question Type : MCQ Option Shuffling : No Is Question Mandatory : No Calculator : None Response Time : N.A Think Time : N.A Minimum Instruction Time : 0**

**Correct Marks : 4 Wrong Marks : 1**

साधारण ब्याज पर कुछ धनराशि 3 वर्ष में ₹1278 तथा  $5\frac{1}{2}$  वर्ष में ₹1593 हो जाती है | वार्षिक ब्याज दर ज्ञात कीजिए |

(1) 13%

(2) 14%

(3) 15.5%

(4) 16%

**Options :**

92090689465. 1

92090689466. 2

92090689467. 3

92090689468. 4

**Question Number : 68 Question Id : 92090622638 Question Type : MCQ Option Shuffling : No Is Question Mandatory : No Calculator : None Response Time : N.A Think Time : N.A Minimum Instruction Time : 0**

**Correct Marks : 4 Wrong Marks : 1**

Find the sum of the fourth proportional of 60, 24, 15 and the mean proportional of 5 and 20.

- (1) 47.5 (2) 16  
(3) 106 (4) 116

**Options :**

92090689469. 1  
92090689470. 2  
92090689471. 3  
92090689472. 4

**Question Number : 68 Question Id : 92090622638 Question Type : MCQ Option Shuffling : No Is Question Mandatory : No Calculator : None Response Time : N.A Think Time : N.A Minimum Instruction Time : 0**

**Correct Marks : 4 Wrong Marks : 1**

60, 24, 15 का चतुर्थानुपाती तथा 5 और 20 के मध्यानुपाती का योग ज्ञात कीजिए।

- (1) 47.5 (2) 16  
(3) 106 (4) 116

**Options :**

92090689469. 1  
92090689470. 2  
92090689471. 3  
92090689472. 4

**Question Number : 69 Question Id : 92090622639 Question Type : MCQ Option Shuffling : No Is Question Mandatory : No Calculator : None Response Time : N.A Think Time : N.A Minimum Instruction Time : 0**

**Correct Marks : 4 Wrong Marks : 1**

Akhil is two times as efficient as Vinod and Kamal is three times as efficient as Vinod. They worked together and received ₹ 5,700 for doing the work. Find the share of Kamal in the money received.

- (1) ₹ 1800 (2) ₹ 1900  
(3) ₹ 2580 (4) ₹ 2850

**Options :**

92090689473. 1  
92090689474. 2  
92090689475. 3  
92090689476. 4

**Question Number : 69 Question Id : 92090622639 Question Type : MCQ Option Shuffling : No Is Question Mandatory : No Calculator : None Response Time : N.A Think Time : N.A Minimum Instruction Time : 0**

**Correct Marks : 4 Wrong Marks : 1**

अखिल की क्षमता विनोद की क्षमता की दुगुनी है तथा कमल की क्षमता विनोद की क्षमता की तीन गुनी है। उन्होंने एक साथ काम किया और काम करने के ₹5700 प्राप्त किए। प्राप्त धनराशि में कमल का हिस्सा ज्ञात कीजिए?

- |            |            |
|------------|------------|
| (1) ₹ 1800 | (2) ₹ 1900 |
| (3) ₹ 2580 | (4) ₹ 2850 |

**Options :**

- 92090689473. 1
- 92090689474. 2
- 92090689475. 3
- 92090689476. 4

**Question Number : 70 Question Id : 92090622640 Question Type : MCQ Option Shuffling : No Is Question Mandatory : No Calculator : None Response Time : N.A Think Time : N.A Minimum Instruction Time : 0**

**Correct Marks : 4 Wrong Marks : 1**

Pipes A and B can fill a tank in 25 hours and 10 hours respectively. Pipe A was opened and after half an hour pipe B was also opened. In how much time the tank got filled?

- |                        |                        |
|------------------------|------------------------|
| (1) 7 hours 10 minutes | (2) 7 hours 15 minutes |
| (3) 7 hours 30 minutes | (4) 7 hours 45 minutes |

**Options :**

- 92090689477. 1
- 92090689478. 2
- 92090689479. 3
- 92090689480. 4

**Question Number : 70 Question Id : 92090622640 Question Type : MCQ Option Shuffling : No Is Question Mandatory : No Calculator : None Response Time : N.A Think Time : N.A Minimum Instruction Time : 0**

**Correct Marks : 4 Wrong Marks : 1**

पाइपें A तथा B एक टंकी को क्रमशः 25 घंटे तथा 10 घंटे में भर सकती हैं | पाइप A को खोला गया और उसके आधे घंटे बाद पाइप B भी खोल दी गई | कितने समय में टंकी भर गई ?

- (1) 7 घंटे 10 मिनट (2) 7 घंटे 15 मिनट  
(3) 7 घंटे 30 मिनट (4) 7 घंटे 45 मिनट

**Options :**

92090689477. 1  
92090689478. 2  
92090689479. 3  
92090689480. 4

**Question Number : 71 Question Id : 92090622641 Question Type : MCQ Option Shuffling : No Is Question Mandatory : No Calculator : None Response Time : N.A Think Time : N.A Minimum Instruction Time : 0**

**Correct Marks : 4 Wrong Marks : 1**

Three boys A, B and C are running with speeds 40 m/s, 2500 m/minute and 144 km/h respectively, then

- (1) A and C have same speed which is less than the speed of B  
(2) Speed of B is the highest  
(3) Speed of C is more than the speed of B  
(4) All the boys A, B, and C have equal speeds

Choose the correct answer from the options given below :

- (1) (A) & (C) Only  
(2) (A) & (B) Only  
(3) (D) Only  
(4) (A), (B) & (C) Only

**Options :**

92090689481. 1  
92090689482. 2  
92090689483. 3  
92090689484. 4

**Question Number : 71 Question Id : 92090622641 Question Type : MCQ Option Shuffling : No Is Question Mandatory : No Calculator : None Response Time : N.A Think Time : N.A Minimum Instruction Time : 0**

**Correct Marks : 4 Wrong Marks : 1**



तीन लड़के A, B तथा C क्रमशः 40 m/s, 2500 m/मिनट तथा 144 km/h की गति से दौड़ रहे हैं, तो

- A. A तथा C की गति बराबर है जो कि B की गति से कम है
- B. B की गति अधिकतम है
- C. C की गति, B की गति से अधिक है
- D. सभी लड़कों A, B तथा C की गति बराबर है

नीचे दिए गए विकल्पों में से सही उत्तर का चयन कीजिए :

- (1) केवल A तथा C
- (2) केवल A तथा B
- (3) केवल D
- (4) केवल A, B, तथा C

**Options :**

- 92090689481. 1
- 92090689482. 2
- 92090689483. 3
- 92090689484. 4

**Question Number : 72 Question Id : 92090622642 Question Type : MCQ Option Shuffling : No Is Question Mandatory : No Calculator : None Response Time : N.A Think Time : N.A Minimum Instruction Time : 0**

**Correct Marks : 4 Wrong Marks : 1**

A man invests some money partly in 8% stock at 105 and partly in 12%, stock at 90. In what ratio should he invest the money to have equal dividends?

- (1) 3:2
- (2) 9:7
- (3) 7:4
- (4) 2:3

**Options :**

- 92090689485. 1
- 92090689486. 2
- 92090689487. 3
- 92090689488. 4

**Question Number : 72 Question Id : 92090622642 Question Type : MCQ Option Shuffling : No Is Question Mandatory : No Calculator : None Response Time : N.A Think Time : N.A Minimum Instruction Time : 0**

**Correct Marks : 4 Wrong Marks : 1**

एक व्यक्ति धनराशि का कुछ अंश 8% स्टॉक 105 पर तथा कुछ अंश 12% स्टॉक 90 पर निवेश करता है। उसे धनराशि को किस अनुपात में निवेशित करना चाहिए कि उसे बराबर लाभांश मिले?

- (1) 3:2 (2) 9:7  
(3) 7:4 (4) 2:3

**Options :**

92090689485. 1  
92090689486. 2  
92090689487. 3  
92090689488. 4

**Question Number : 73 Question Id : 92090622643 Question Type : MCQ Option Shuffling : No Is Question Mandatory : No Calculator : None Response Time : N.A Think Time : N.A Minimum Instruction Time : 0**

**Correct Marks : 4 Wrong Marks : 1**

A dealer marked an item with cost price Rs.600 at 50% above the cost price and offered 20% discount. Find the selling price.

- (1) Rs.480 (2) Rs.600  
(3) Rs.720 (4) Rs.800

**Options :**

92090689489. 1  
92090689490. 2  
92090689491. 3  
92090689492. 4

**Question Number : 73 Question Id : 92090622643 Question Type : MCQ Option Shuffling : No Is Question Mandatory : No Calculator : None Response Time : N.A Think Time : N.A Minimum Instruction Time : 0**

**Correct Marks : 4 Wrong Marks : 1**

एक विक्रेता एक वस्तु जिसका क्रय मूल्य ₹ 600 है को क्रय मूल्य से 50% अधिक पर अंकित करता है और 20% बढ़ा देता है। विक्रय मूल्य ज्ञात कीजिये।

- (1) ₹ 480 (2) ₹ 600  
(3) ₹ 720 (4) ₹ 800

**Options :**

92090689489. 1  
92090689490. 2

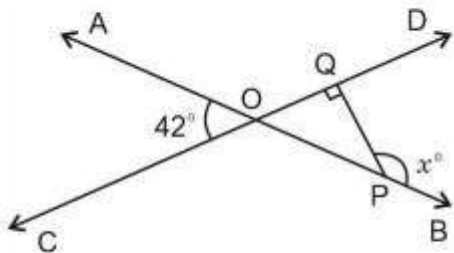
92090689491. 3

92090689492. 4

**Question Number : 74 Question Id : 92090622644 Question Type : MCQ Option Shuffling : No Is Question Mandatory : No Calculator : None Response Time : N.A Think Time : N.A Minimum Instruction Time : 0**

**Correct Marks : 4 Wrong Marks : 1**

In the figure,  $\angle AOC = 42^\circ$  and PQ is perpendicular to CD. Find the value of  $x$ .



(1) 158

(2) 138

(3) 132

(4) 118

**Options :**

92090689493. 1

92090689494. 2

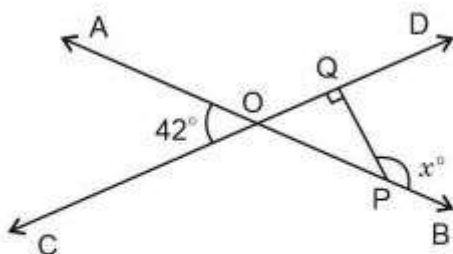
92090689495. 3

92090689496. 4

**Question Number : 74 Question Id : 92090622644 Question Type : MCQ Option Shuffling : No Is Question Mandatory : No Calculator : None Response Time : N.A Think Time : N.A Minimum Instruction Time : 0**

**Correct Marks : 4 Wrong Marks : 1**

आकृति में,  $\angle AOC = 42^\circ$  तथा PQ, CD पर लम्ब है।  $x$  का मान ज्ञात कीजिए।



(1) 158

(2) 138

(3) 132

(4) 118

**Options :**

92090689493. 1

92090689494. 2

92090689495. 3

92090689496. 4

**Question Number : 75 Question Id : 92090622645 Question Type : MCQ Option Shuffling : No Is Question Mandatory : No Calculator : None Response Time : N.A Think Time : N.A Minimum Instruction Time : 0**

**Correct Marks : 4 Wrong Marks : 1**

The value of  $\frac{1 + \tan^2 \theta}{1 + \cot^2 \theta} \times (1 - \sin^2 \theta)$  is

(1)  $\frac{1}{\sec^2 \theta}$

(2)  $\frac{1}{\operatorname{cosec}^2 \theta}$

(3)  $\tan^2 \theta$

(4)  $\cot^2 \theta$

**Options :**

92090689497. 1

92090689498. 2

92090689499. 3

92090689500. 4

**Question Number : 75 Question Id : 92090622645 Question Type : MCQ Option Shuffling : No Is Question Mandatory : No Calculator : None Response Time : N.A Think Time : N.A Minimum Instruction Time : 0**

**Correct Marks : 4 Wrong Marks : 1**

$\frac{1 + \tan^2 \theta}{1 + \cot^2 \theta} \times (1 - \sin^2 \theta)$  का मान है

(1)  $\frac{1}{\sec^2 \theta}$

(2)  $\frac{1}{\operatorname{cosec}^2 \theta}$

(3)  $\tan^2 \theta$

(4)  $\cot^2 \theta$

**Options :**

92090689497. 1

92090689498. 2

92090689499. 3

92090689500. 4

**Question Number : 76 Question Id : 92090622646 Question Type : MCQ Option Shuffling : No Is Question Mandatory : No Calculator : None Response Time : N.A Think Time : N.A Minimum Instruction Time : 0**

**Correct Marks : 4 Wrong Marks : 1**

If  $A = \{ 2, 3, 6 \}$  and  $B = \{ 2, 3, 4, 5, 6 \}$  are two sets, then

- (A)  $A \subset B$  (B)  $A \cup B = B$   
(C)  $A \cap B = \phi$  (D)  $A \cap B = A$

Choose the correct answer from the options given below :

- (1) (A) & (B) Only  
(2) (B) & (C) Only  
(3) (A), (B) & (D) Only  
(4) (B) & (D) Only

**Options :**

92090689501. 1  
92090689502. 2  
92090689503. 3  
92090689504. 4

**Question Number : 76 Question Id : 92090622646 Question Type : MCQ Option Shuffling : No Is Question Mandatory : No Calculator : None Response Time : N.A Think Time : N.A Minimum Instruction Time : 0**

**Correct Marks : 4 Wrong Marks : 1**

यदि  $A = \{ 2, 3, 6 \}$  तथा  $B = \{ 2, 3, 4, 5, 6 \}$  दो समुच्चय हैं, तो

- (A)  $A \subset B$  (B)  $A \cup B = B$   
(C)  $A \cap B = \phi$  (D)  $A \cap B = A$

Choose the correct answer from the options given below :

- (1) केवल A तथा B  
(2) केवल B तथा C  
(3) केवल A, B तथा D  
(4) केवल B तथा D

**Options :**

92090689501. 1  
92090689502. 2  
92090689503. 3  
92090689504. 4

**Question Number : 77 Question Id : 92090622647 Question Type : MCQ Option Shuffling : No Is Question Mandatory : No Calculator : None Response Time : N.A Think Time : N.A Minimum Instruction Time : 0**

**Correct Marks : 4 Wrong Marks : 1**

If mean of 7, 2, 9, 4 and K is 5, then find the median of 12, 6, K, 9, 15

- |        |        |
|--------|--------|
| (1) 6  | (2) 9  |
| (3) 10 | (4) 12 |

**Options :**

- 92090689505. 1
- 92090689506. 2
- 92090689507. 3
- 92090689508. 4

**Question Number : 77 Question Id : 92090622647 Question Type : MCQ Option Shuffling : No Is Question Mandatory : No Calculator : None Response Time : N.A Think Time : N.A Minimum Instruction Time : 0**

**Correct Marks : 4 Wrong Marks : 1**

यदि 7, 2, 9, 4 तथा K का माध्य 5 है, तो 12, 6, K, 9, 15 का माध्यक ज्ञात कीजिए।

- |        |        |
|--------|--------|
| (1) 6  | (2) 9  |
| (3) 10 | (4) 12 |

**Options :**

- 92090689505. 1
- 92090689506. 2
- 92090689507. 3
- 92090689508. 4

**Question Number : 78 Question Id : 92090622648 Question Type : MCQ Option Shuffling : No Is Question Mandatory : No Calculator : None Response Time : N.A Think Time : N.A Minimum Instruction Time : 0**

**Correct Marks : 4 Wrong Marks : 1**

Solution A Contains 12% water and the remaining is milk. Solution B contains 30% water and the remaining is milk. In what ratio should solutions A and B be mixed to obtain a mixture with 84% milk?

- |         |         |
|---------|---------|
| (1) 2:7 | (2) 7:2 |
| (3) 3:8 | (4) 8:3 |

**Options :**

92090689509. 1  
92090689510. 2  
92090689511. 3  
92090689512. 4

**Question Number : 78 Question Id : 92090622648 Question Type : MCQ Option Shuffling : No Is Question Mandatory : No Calculator : None Response Time : N.A Think Time : N.A Minimum Instruction Time : 0**

**Correct Marks : 4 Wrong Marks : 1**

घोल A में 12% पानी तथा शेष दूध है | घोल B में 30% पानी तथा शेष दूध है | घोल A तथा B को किस अनुपात में मिलाया जाए कि मिश्रण में 84% दूध हो?

- (1) 2:7 (2) 7:2  
(3) 3:8 (4) 8:3

**Options :**

92090689509. 1  
92090689510. 2  
92090689511. 3  
92090689512. 4

**Question Number : 79 Question Id : 92090622649 Question Type : MCQ Option Shuffling : No Is Question Mandatory : No Calculator : None Response Time : N.A Think Time : N.A Minimum Instruction Time : 0**

**Correct Marks : 4 Wrong Marks : 1**

A quadrilateral ABCD has diagonal AC of length 28 cm. If the perpendiculars drawn from vertices B and D to AC are 30 cm and 21 cm respectively, then find its area.

- (1) 1428 cm<sup>2</sup> (2) 357.5 cm<sup>2</sup>  
(3) 710.5 cm<sup>2</sup> (4) 714 cm<sup>2</sup>

**Options :**

92090689513. 1  
92090689514. 2  
92090689515. 3  
92090689516. 4

**Question Number : 79 Question Id : 92090622649 Question Type : MCQ Option Shuffling : No Is Question Mandatory : No Calculator : None Response Time : N.A Think Time : N.A Minimum Instruction Time : 0**

**Correct Marks : 4 Wrong Marks : 1**

एक चतुर्भुज ABCD के विकर्ण AC की लम्बाई 28 cm है | यदि शीर्षों B तथा D से AC पर डाले गए लम्ब क्रमशः 30 cm तथा 21 cm हैं, तो इसका क्षेत्रफल ज्ञात कीजिए |

- (1) 1428 cm<sup>2</sup> (2) 357.5 cm<sup>2</sup>  
(3) 710.5 cm<sup>2</sup> (4) 714 cm<sup>2</sup>

**Options :**

92090689513. 1  
92090689514. 2  
92090689515. 3  
92090689516. 4

**Question Number : 80 Question Id : 92090622650 Question Type : MCQ Option Shuffling : No Is Question Mandatory : No Calculator : None Response Time : N.A Think Time : N.A Minimum Instruction Time : 0**

**Correct Marks : 4 Wrong Marks : 1**

A vessel is in the form of a hemispherical bowl surmounted by a hollow cylinder. The diameter of the sphere is 42 cm and the height of the vessel is 27 cm. Find its capacity in cm<sup>3</sup>. (Use  $\pi = \frac{22}{7}$ )

- (1) 18849.6 (2) 56826  
(3) 27720 (4) 56286

**Options :**

92090689517. 1  
92090689518. 2  
92090689519. 3  
92090689520. 4

**Question Number : 80 Question Id : 92090622650 Question Type : MCQ Option Shuffling : No Is Question Mandatory : No Calculator : None Response Time : N.A Think Time : N.A Minimum Instruction Time : 0**

**Correct Marks : 4 Wrong Marks : 1**

एक बर्तन जो अर्द्धगोलाकार कटोरे के आकार का है, के ऊपर एक खोखला बेलन खड़ा है | गोले का व्यास 42 cm है तथा बर्तन की ऊंचाई 27 cm है। इसकी धरिता cm<sup>3</sup> में ज्ञात कीजिए। ( $\pi = \frac{22}{7}$ )

- (1) 18849.6 (2) 56826  
(3) 27720 (4) 56286

**Options :**



92090689517. 1  
92090689518. 2  
92090689519. 3  
92090689520. 4

**Question Number : 81 Question Id : 92090622651 Question Type : MCQ Option Shuffling : No Is Question Mandatory : No Calculator : None Response Time : N.A Think Time : N.A Minimum Instruction Time : 0**

**Correct Marks : 4 Wrong Marks : 1**

Find the next term of the given series : 2, 12, 36, 80, 150

- (1) 250 (2) 252  
(3) 239 (4) 159

**Options :**

92090689521. 1  
92090689522. 2  
92090689523. 3  
92090689524. 4

**Question Number : 81 Question Id : 92090622651 Question Type : MCQ Option Shuffling : No Is Question Mandatory : No Calculator : None Response Time : N.A Think Time : N.A Minimum Instruction Time : 0**

**Correct Marks : 4 Wrong Marks : 1**

नीचे दी गई श्रृंखला का अगला पद ज्ञात कीजिए :

2, 12, 36, 80, 150.....

- (1) 250 (2) 252  
(3) 239 (4) 159

**Options :**

92090689521. 1  
92090689522. 2  
92090689523. 3  
92090689524. 4

**Question Number : 82 Question Id : 92090622652 Question Type : MCQ Option Shuffling : No Is Question Mandatory : No Calculator : None Response Time : N.A Think Time : N.A Minimum Instruction Time : 0**

**Correct Marks : 4 Wrong Marks : 1**

In a competition Alka ranks 11<sup>th</sup> from the top and 27<sup>th</sup> from the bottom while Anamika ranks 14<sup>th</sup> from the top. How many candidates have their names listed below Anamika's in that competition's result?

- (1) 25 (2) 29  
(3) 26 (4) 23

**Options :**

92090689525. 1  
92090689526. 2  
92090689527. 3  
92090689528. 4

**Question Number : 82 Question Id : 92090622652 Question Type : MCQ Option Shuffling : No Is Question Mandatory : No Calculator : None Response Time : N.A Think Time : N.A Minimum Instruction Time : 0**

**Correct Marks : 4 Wrong Marks : 1**

एक प्रतियोगिता में अलका की रैंक शीर्ष से 11 वें स्थान और नीचे से 27 वें स्थान पर थी, जबकि अनामिका की रैंक शीर्ष से 14 वें स्थान पर थी | इस प्रतियोगिता के परिणामों में अनामिका के नीचे कितने उम्मीदवारों के नाम सूचीबद्ध हैं |

- (1) 25 (2) 29  
(3) 26 (4) 23

**Options :**

92090689525. 1  
92090689526. 2  
92090689527. 3  
92090689528. 4

**Question Number : 83 Question Id : 92090622653 Question Type : MCQ Option Shuffling : No Is Question Mandatory : No Calculator : None Response Time : N.A Think Time : N.A Minimum Instruction Time : 0**

**Correct Marks : 4 Wrong Marks : 1**

Six friends A, B, C, D, E and F are sitting in a row facing towards North. C is sitting between A and E . D is not at the end. B is sitting immediate right to E. F is not at the right end. How many persons are there to the right of D?

- (1) 2 (2) 3  
(3) 1 (4) 4

**Options :**

92090689529. 1  
92090689530. 2  
92090689531. 3  
92090689532. 4

**Question Number : 83 Question Id : 92090622653 Question Type : MCQ Option Shuffling : No Is Question Mandatory : No Calculator : None Response Time : N.A Think Time : N.A Minimum Instruction Time : 0**

**Correct Marks : 4 Wrong Marks : 1**

छह मित्र A, B, C, D, E और F एक पंक्ति में उत्तर दिशा के सामने बैठे हुए हैं। C, A और E के बीच बैठा हुआ है। D अंत में नहीं है। B, E के सन्निकट दाएं में बैठा है। F दायें से अंत में नहीं है। तो D के दायें में कितने व्यक्ति हैं?

- (1) 2 (2) 3  
(3) 1 (4) 4

**Options :**

92090689529. 1  
92090689530. 2  
92090689531. 3  
92090689532. 4

**Question Number : 84 Question Id : 92090622654 Question Type : MCQ Option Shuffling : No Is Question Mandatory : No Calculator : None Response Time : N.A Think Time : N.A Minimum Instruction Time : 0**

**Correct Marks : 4 Wrong Marks : 1**

Bharti travelled 19 km to the East. She turned left and went 15 km. She again turned left and went 19 km. How far she is from the initial position?

- (1) 14 km (2) 15 km  
(3) 19 km (4) 18 km

**Options :**

92090689533. 1  
92090689534. 2  
92090689535. 3  
92090689536. 4

**Question Number : 84 Question Id : 92090622654 Question Type : MCQ Option Shuffling : No Is Question Mandatory : No Calculator : None Response Time : N.A Think Time : N.A Minimum Instruction Time : 0**

**Correct Marks : 4 Wrong Marks : 1**

भारती उत्तर की ओर 19 किमी. की यात्रा करती है | वह बाईं ओर मुड़ती है और 15 किमी. तक जाती है। वह पुनः बाईं ओर मुड़ती है और 19 कि.मी. जाती है। अब वह आरम्भिक स्थान से कितनी दूर है?

- (1) 14 किमी. (2) 15 किमी.  
 (3) 19 किमी. (4) 18 किमी.


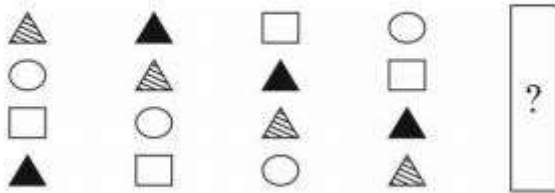
**Options :**

92090689533. 1  
 92090689534. 2  
 92090689535. 3  
 92090689536. 4

**Question Number : 85 Question Id : 92090622655 Question Type : MCQ Option Shuffling : No Is Question Mandatory : No Calculator : None Response Time : N.A Think Time : N.A Minimum Instruction Time : 0**

**Correct Marks : 4 Wrong Marks : 1**

Which of the images A to D is next in the sequence (in place of?)?



- (1) A (2) B  
 (3) C (4) D


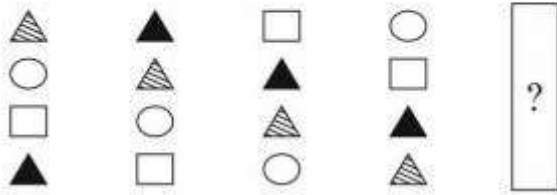
**Options :**

92090689537. 1  
 92090689538. 2  
 92090689539. 3  
 92090689540. 4

**Question Number : 85 Question Id : 92090622655 Question Type : MCQ Option Shuffling : No Is Question Mandatory : No Calculator : None Response Time : N.A Think Time : N.A Minimum Instruction Time : 0**

Correct Marks : 4 Wrong Marks : 1

A से D तक की कौनसी छवियाँ अनुक्रम में नहीं हैं?



- (1) A (2) B  
(3) C (4) D

Options :

92090689537. 1  
92090689538. 2  
92090689539. 3  
92090689540. 4

Question Number : 86 Question Id : 92090622656 Question Type : MCQ Option Shuffling : No Is Question Mandatory : No Calculator : None Response Time : N.A Think Time : N.A Minimum Instruction Time : 0

Correct Marks : 4 Wrong Marks : 1

Study the following five numbers and answer the question given below : 617 425 739 941 892. What will be the first digit of the second highest number after the positions of only the second and the third digits within each number are interchanged?

- (1) 6 (2) 2  
(3) 9 (4) 8

Options :

92090689541. 1  
92090689542. 2  
92090689543. 3  
92090689544. 4

**Question Number : 86 Question Id : 92090622656 Question Type : MCQ Option Shuffling : No Is Question Mandatory : No Calculator : None Response Time : N.A Think Time : N.A Minimum Instruction Time : 0**

**Correct Marks : 4 Wrong Marks : 1**

निम्नलिखित संख्याओं का अध्ययन करें और नीचे दिए गए प्रश्न का उत्तर दीजिए:

617 425 739 941 892

प्रत्येक संख्या में केवल द्वितीय अंक और तृतीय अंक की स्थितियों को परस्पर – बदलने के बाद द्वितीय उच्चतम संख्या का प्रथम अंक क्या होगा?

- (1) 6 (2) 2  
(3) 9 (4) 8

**Options :**

92090689541. 1  
92090689542. 2  
92090689543. 3  
92090689544. 4

**Question Number : 87 Question Id : 92090622657 Question Type : MCQ Option Shuffling : No Is Question Mandatory : No Calculator : None Response Time : N.A Think Time : N.A Minimum Instruction Time : 0**

**Correct Marks : 4 Wrong Marks : 1**

Select the related number from the given alternative : 14 : 8 : 24 : ?

- (1) 12 (2) 13  
(3) 14 (4) 15

**Options :**

92090689545. 1  
92090689546. 2  
92090689547. 3  
92090689548. 4

**Question Number : 87 Question Id : 92090622657 Question Type : MCQ Option Shuffling : No Is Question Mandatory : No Calculator : None Response Time : N.A Think Time : N.A Minimum Instruction Time : 0**

**Correct Marks : 4 Wrong Marks : 1**

लुप्त संख्या ज्ञात कीजिए।

14 : 8 : 24 : ?

- |        |        |
|--------|--------|
| (1) 12 | (2) 13 |
| (3) 14 | (4) 15 |

**Options :**

92090689545. 1  
92090689546. 2  
92090689547. 3  
92090689548. 4

**Question Number : 88 Question Id : 92090622658 Question Type : MCQ Option Shuffling : No Is Question Mandatory : No Calculator : None Response Time : N.A Think Time : N.A Minimum Instruction Time : 0**

**Correct Marks : 4 Wrong Marks : 1**

In a certain code 'I work hard' is coded as 'kom pe seet', 'work is worship' is coded as 'pun te seet' and 'I workshp God' is coded as 'pun pan pe'. What is the code of 'hard'?

- |          |         |
|----------|---------|
| (1) pe   | (2) kom |
| (3) seet | (4) pun |

**Options :**

92090689549. 1  
92090689550. 2  
92090689551. 3  
92090689552. 4

**Question Number : 88 Question Id : 92090622658 Question Type : MCQ Option Shuffling : No Is Question Mandatory : No Calculator : None Response Time : N.A Think Time : N.A Minimum Instruction Time : 0**

**Correct Marks : 4 Wrong Marks : 1**

एक कतिपय कूट में 'I work hard को - kom pe seet' के रूप में कूटबद्ध किया गया है, 'work is worship' को 'pun te seet' के रूप में कूटबद्ध किया गया है और 'I workshp God' को 'pun pan pe' के रूप में कूटबद्ध किया गया है। 'hard' का क्या कूट है?

- |          |         |
|----------|---------|
| (1) pe   | (2) kom |
| (3) seet | (4) pun |

**Options :**

92090689549. 1  
92090689550. 2

92090689551. 3

92090689552. 4

**Question Number : 89 Question Id : 92090622659 Question Type : MCQ Option Shuffling : No Is Question Mandatory : No Calculator : None Response Time : N.A Think Time : N.A Minimum Instruction Time : 0**

**Correct Marks : 4 Wrong Marks : 1**

Pointing towards Ram, Sita says that he is the son of my husband's father-in-law's wife. How is Ram related to Sita?

- |             |                    |
|-------------|--------------------|
| (1) Brother | (2) Brother-in-law |
| (3) Son     | (4) Son-in-law     |

**Options :**

92090689553. 1

92090689554. 2

92090689555. 3

92090689556. 4

**Question Number : 89 Question Id : 92090622659 Question Type : MCQ Option Shuffling : No Is Question Mandatory : No Calculator : None Response Time : N.A Think Time : N.A Minimum Instruction Time : 0**

**Correct Marks : 4 Wrong Marks : 1**

राम की ओर संकेत करते हुए सीता ने कहा कि वह मेरे पति के फादर-इन-लॉ की पत्नी का पुत्र है। राम सीता से कैसे सम्बंधित है?

- |           |                 |
|-----------|-----------------|
| (1) भाई   | (2) ब्रदर-इन-लॉ |
| (3) पुत्र | (4) सन-इन-लॉ    |

**Options :**

92090689553. 1

92090689554. 2

92090689555. 3

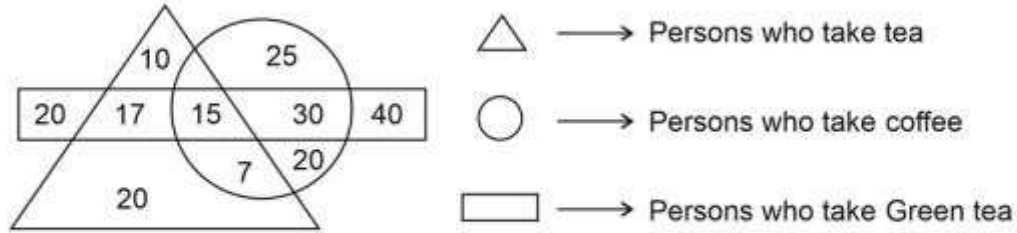
92090689556. 4

**Question Number : 90 Question Id : 92090622660 Question Type : MCQ Option Shuffling : No Is Question Mandatory : No Calculator : None Response Time : N.A Think Time : N.A Minimum Instruction Time : 0**

**Correct Marks : 4 Wrong Marks : 1**



How many persons do not take tea and coffee but take green tea?



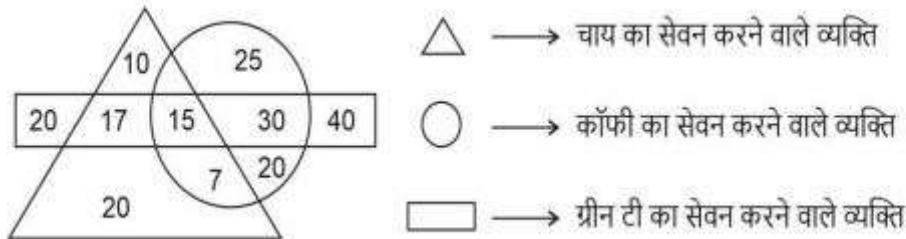
- (1) 20 (2) 60  
 (3) 70 (4) 90

**Options :**

92090689557. 1  
 92090689558. 2  
 92090689559. 3  
 92090689560. 4

**Question Number : 90 Question Id : 92090622660 Question Type : MCQ Option Shuffling : No Is Question Mandatory : No Calculator : None Response Time : N.A Think Time : N.A Minimum Instruction Time : 0**

**Correct Marks : 4 Wrong Marks : 1**



कितने व्यक्ति चाय और कॉफ़ी का सेवन नहीं करते हैं, लेकिन ग्रीन टी का सेवन करते हैं?

- (1) 20 (2) 60  
 (3) 70 (4) 90

**Options :**

92090689557. 1  
 92090689558. 2  
 92090689559. 3  
 92090689560. 4

**Question Number : 91 Question Id : 92090622661 Question Type : MCQ Option Shuffling : No Is Question Mandatory : No Calculator : None Response Time : N.A Think Time : N.A Minimum**

**Instruction Time : 0**

**Correct Marks : 4 Wrong Marks : 1**

In a certain code, TEACHER is written as WHDFKHU. In the same system of coding, what should be the code for the word STATEMENT?

- |               |               |
|---------------|---------------|
| (1) VWDWHPHQW | (2) VWEWHPHQW |
| (3) WVWDHPHQV | (4) VWWDHPQHW |

**Options :**

- 92090689561. 1
- 92090689562. 2
- 92090689563. 3
- 92090689564. 4

**Question Number : 91 Question Id : 92090622661 Question Type : MCQ Option Shuffling : No Is Question Mandatory : No Calculator : None Response Time : N.A Think Time : N.A Minimum Instruction Time : 0**

**Correct Marks : 4 Wrong Marks : 1**

एक कतिपय कूट में TEACHER को WHDFKHU के रूप में लिखा जाता है। कूटबद्धता की इसी प्रणाली में शब्द – STATEMENT का क्या कूट होना चाहिए?

- |               |               |
|---------------|---------------|
| (1) VWDWHPHQW | (2) VWEWHPHQW |
| (3) WVWDHPHQV | (4) VWWDHPQHW |

**Options :**

- 92090689561. 1
- 92090689562. 2
- 92090689563. 3
- 92090689564. 4

**Question Number : 92 Question Id : 92090622662 Question Type : MCQ Option Shuffling : No Is Question Mandatory : No Calculator : None Response Time : N.A Think Time : N.A Minimum Instruction Time : 0**

**Correct Marks : 4 Wrong Marks : 1**

Birds : Ornithology :: Fish : \_\_\_\_\_.

- |                   |                 |
|-------------------|-----------------|
| (1) Ichthyology   | (2) Hermitology |
| (3) Helminthology | (4) Kalology    |

**Options :**

- 92090689565. 1
- 92090689566. 2

92090689567. 3

92090689568. 4

**Question Number : 92 Question Id : 92090622662 Question Type : MCQ Option Shuffling : No Is Question Mandatory : No Calculator : None Response Time : N.A Think Time : N.A Minimum Instruction Time : 0**

**Correct Marks : 4 Wrong Marks : 1**

पक्षी: ओर्निथोलॉजी (Ornithology) : : मछली \_\_\_\_\_

- |                                    |                               |
|------------------------------------|-------------------------------|
| (1) मत्स्य विज्ञान(Ichthyology)    | (2) हर्मिटोलॉजी (Hermitology) |
| (3) हेल्मिन्थोलॉजी (Helminthology) | (4) कैलोलॉजी (Kalology)       |

**Options :**

92090689565. 1

92090689566. 2

92090689567. 3

92090689568. 4

**Question Number : 93 Question Id : 92090622663 Question Type : MCQ Option Shuffling : No Is Question Mandatory : No Calculator : None Response Time : N.A Think Time : N.A Minimum Instruction Time : 0**

**Correct Marks : 4 Wrong Marks : 1**

If \$ means 'plus (+)', # means 'minus (-)', @ means 'multiplied (x)' and \* means 'divided (÷)', then the value of  $46\$4@5\#72*8$  is :

- |        |        |
|--------|--------|
| (1) 59 | (2) 55 |
| (3) 57 | (4) 66 |

**Options :**

92090689569. 1

92090689570. 2

92090689571. 3

92090689572. 4

**Question Number : 93 Question Id : 92090622663 Question Type : MCQ Option Shuffling : No Is Question Mandatory : No Calculator : None Response Time : N.A Think Time : N.A Minimum Instruction Time : 0**

**Correct Marks : 4 Wrong Marks : 1**

यदि \$ का अर्थ 'योग' (+), # का अर्थ घटा (-), @ का अर्थ गुणन (x) और \* का अर्थ विभाजन (÷) है तो 46 \$ 4 @ 5 # 72 \* 8 का मान क्या है?

- (1) 59 (2) 55  
(3) 57 (4) 66

**Options :**

92090689569. 1  
92090689570. 2  
92090689571. 3  
92090689572. 4

**Question Number : 94 Question Id : 92090622664 Question Type : MCQ Option Shuffling : No Is Question Mandatory : No Calculator : None Response Time : N.A Think Time : N.A Minimum Instruction Time : 0**

**Correct Marks : 4 Wrong Marks : 1**

Funk : Vitamin : Curie:?

- (1) Uranium (2) Radium  
(3) Radioactivity (4) Photography

**Options :**

92090689573. 1  
92090689574. 2  
92090689575. 3  
92090689576. 4

**Question Number : 94 Question Id : 92090622664 Question Type : MCQ Option Shuffling : No Is Question Mandatory : No Calculator : None Response Time : N.A Think Time : N.A Minimum Instruction Time : 0**

**Correct Marks : 4 Wrong Marks : 1**

तीखी गंध : विटामिन :: सी क्यूरी : \_\_\_\_\_?

- (1) यूरेनियम (2) रेडियम  
(3) रेडियोधर्मिता (4) फोटोग्राफी

**Options :**

92090689573. 1  
92090689574. 2  
92090689575. 3  
92090689576. 4

**Question Number : 95 Question Id : 92090622665 Question Type : MCQ Option Shuffling : No Is Question Mandatory : No Calculator : None Response Time : N.A Think Time : N.A Minimum Instruction Time : 0**

**Correct Marks : 4 Wrong Marks : 1**

If January 1, 2005 was Monday, what was the day on January 1, 2009?

- |            |              |
|------------|--------------|
| (1) Friday | (2) Saturday |
| (3) Sunday | (4) Monday   |

**Options :**

- 92090689577. 1
- 92090689578. 2
- 92090689579. 3
- 92090689580. 4

**Question Number : 95 Question Id : 92090622665 Question Type : MCQ Option Shuffling : No Is Question Mandatory : No Calculator : None Response Time : N.A Think Time : N.A Minimum Instruction Time : 0**

**Correct Marks : 4 Wrong Marks : 1**

यदि 1 जनवरी, 2005 को सोमवार था तो 1 जनवरी, 2009 को कौनसा दिन था?

- |              |            |
|--------------|------------|
| (1) शुक्रवार | (2) शनिवार |
| (3) रविवार   | (4) सोमवार |

**Options :**

- 92090689577. 1
- 92090689578. 2
- 92090689579. 3
- 92090689580. 4

**Question Number : 96 Question Id : 92090622666 Question Type : MCQ Option Shuffling : No Is Question Mandatory : No Calculator : None Response Time : N.A Think Time : N.A Minimum Instruction Time : 0**

**Correct Marks : 4 Wrong Marks : 1**

Trace out the Figure which contains fig (x) as its part.

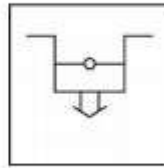
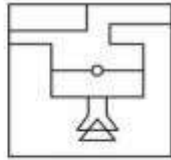
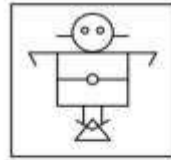


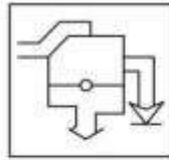
fig (x)



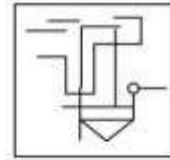
(1)



(2)



(3)



(4)

- (1) 1  
(3) 3

- (2) 2  
(4) 4

**Options :**

92090689581. 1

92090689582. 2

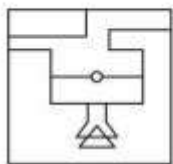
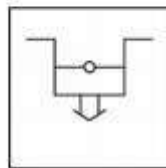
92090689583. 3

92090689584. 4

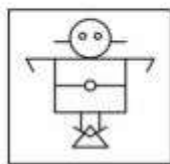
**Question Number : 96 Question Id : 92090622666 Question Type : MCQ Option Shuffling : No Is Question Mandatory : No Calculator : None Response Time : N.A Think Time : N.A Minimum Instruction Time : 0**

**Correct Marks : 4 Wrong Marks : 1**

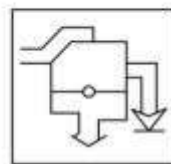
निम्नलिखित में से उस आकृति का पता लगाइए, जिसमें उसके अंग के रूप में आकृति (x) सम्मिलित है?



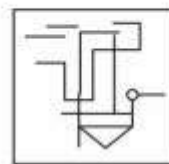
(1)



(2)



(3)



(4)

- (1) 1  
(3) 3

- (2) 2  
(4) 4

**Options :**

92090689581. 1  
92090689582. 2  
92090689583. 3  
92090689584. 4

**Question Number : 97 Question Id : 92090622667 Question Type : MCQ Option Shuffling : No Is Question Mandatory : No Calculator : None Response Time : N.A Think Time : N.A Minimum Instruction Time : 0**  
**Correct Marks : 4 Wrong Marks : 1**

What will be the next term of the given number series : 0, 2, 5, 7, 14, 26, 47, ?

- (1) 83 (2) 85  
(3) 87 (4) 89

**Options :**

92090689585. 1  
92090689586. 2  
92090689587. 3  
92090689588. 4

**Question Number : 97 Question Id : 92090622667 Question Type : MCQ Option Shuffling : No Is Question Mandatory : No Calculator : None Response Time : N.A Think Time : N.A Minimum Instruction Time : 0**  
**Correct Marks : 4 Wrong Marks : 1**

नीच दी गई अंक श्रृंखला का अगला पद क्या है?

0, 2, 5, 7, 14, 26, 47

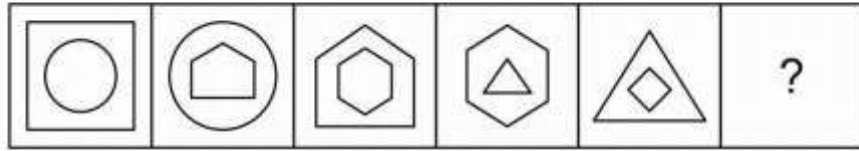
- (1) 83 (2) 85  
(3) 87 (4) 89

**Options :**

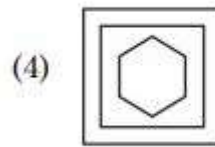
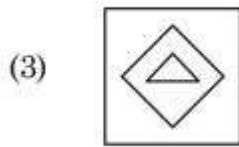
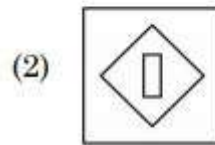
92090689585. 1  
92090689586. 2  
92090689587. 3  
92090689588. 4

**Question Number : 98 Question Id : 92090622668 Question Type : MCQ Option Shuffling : No Is Question Mandatory : No Calculator : None Response Time : N.A Think Time : N.A Minimum Instruction Time : 0**  
**Correct Marks : 4 Wrong Marks : 1**

Which one from the four answer figures should come at the right of the problem figures to complete the series logically?



Problem figures



**Options :**

92090689589. 1

92090689590. 2

92090689591. 3

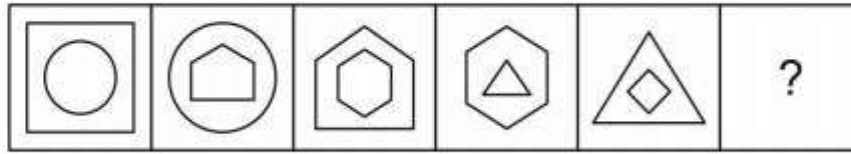
92090689592. 4

**Question Number : 98 Question Id : 92090622668 Question Type : MCQ Option Shuffling : No Is Question Mandatory : No Calculator : None Response Time : N.A Think Time : N.A Minimum Instruction Time : 0**

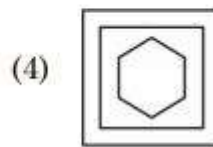
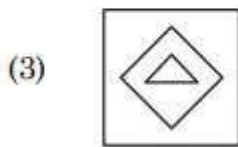
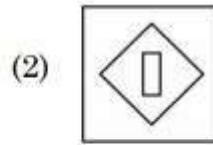
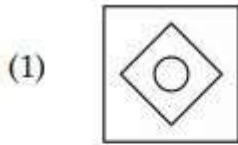
**Correct Marks : 4 Wrong Marks : 1**



इस श्रृंखला को तार्किक रूप से पूरा करने के लिए निम्नलिखित में से कौनसी उत्तर-आकृति, समस्या-आकृति के दाईं ओर आनी चाहिए?



समस्या आकृति



**Options :**

- 92090689589. 1
- 92090689590. 2
- 92090689591. 3
- 92090689592. 4

**Question Number : 99 Question Id : 92090622669 Question Type : MCQ Option Shuffling : No Is Question Mandatory : No Calculator : None Response Time : N.A Think Time : N.A Minimum Instruction Time : 0**

**Correct Marks : 4 Wrong Marks : 1**

Which Conclusion follows on the basis of given statement :

**Statement :** The ABC Engineering College has started a cell which will conduct counselling workshops in the field of stress management to students and faculties.

**Conclusions :** I. The college has needed resources to start such activity.  
II. Students and faculties feel a need to have such cell in the college.

- (1) If only Conclusion I follows
- (2) If only Conclusion II follows
- (3) If both I and II follows
- (4) If either I or II follows

**Options :**

- 92090689593. 1
- 92090689594. 2
- 92090689595. 3
- 92090689596. 4

**Question Number : 99 Question Id : 92090622669 Question Type : MCQ Option Shuffling : No Is Question Mandatory : No Calculator : None Response Time : N.A Think Time : N.A Minimum Instruction Time : 0**

**Correct Marks : 4 Wrong Marks : 1**

कौनसा निष्कर्ष नीचे दिए गए आधार पर पालन करता है?

कथन : ABC इंजीनियरिंग कॉलेज ने प्रकोष्ठ शुरू किया है, जो विद्यार्थियों और शिक्षक-वर्ग (फैकल्टीज़) के तनाव प्रबंधन के क्षेत्र में परामर्श देने के लिए कार्यशालाएं आयोजित करेगा।

निष्कर्ष I : इस कॉलेज के पास उपरोक्त कार्यकलाप शुरू करने के लिए संसाधन आवश्यक हैं।

निष्कर्ष II : विद्यार्थी और फैकल्टीज कालेज में इस प्रकार के प्रकोष्ठ की आवश्यकता महसूस करते हैं।

1. केवल निष्कर्ष I निकलता है।
2. केवल निष्कर्ष II निकलता है।
3. निष्कर्ष I और II दोनों निकलते हैं।
4. निष्कर्ष I और II दोनों में से कोई भी निष्कर्ष निकलता है।

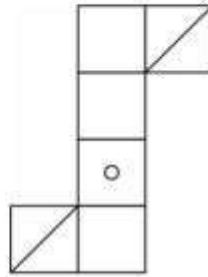
**Options :**

- 92090689593. 1
- 92090689594. 2
- 92090689595. 3
- 92090689596. 4

**Question Number : 100 Question Id : 92090622670 Question Type : MCQ Option Shuffling : No Is Question Mandatory : No Calculator : None Response Time : N.A Think Time : N.A Minimum Instruction Time : 0**

**Correct Marks : 4 Wrong Marks : 1**

Choose the Cube which will be formed on folding the question figure:



(X)



(A)



(B)



(C)



(D)

- (1) (A) & (C) Only
- (2) (A) & (B) Only
- (3) (C) & (D) Only
- (4) (B) & (D) Only

**Options :**

92090689597. 1

92090689598. 2

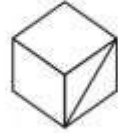
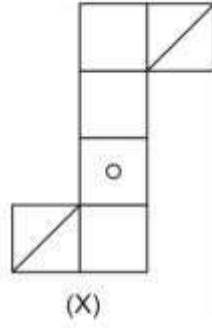
92090689599. 3

92090689600. 4

**Question Number : 100 Question Id : 92090622670 Question Type : MCQ Option Shuffling : No Is Question Mandatory : No Calculator : None Response Time : N.A Think Time : N.A Minimum Instruction Time : 0**

**Correct Marks : 4 Wrong Marks : 1**

विकल्पों में से घन का चयन करें जो प्रश्न आकृति को मोड़ने से प्राप्त होगा।



(A)



(B)



(C)



(D)

- (1) केवल A और C
- (2) केवल A और B
- (3) केवल C और D
- (4) केवल B और D

**Options :**

92090689597. 1  
92090689598. 2  
92090689599. 3  
92090689600. 4