

BOOKS



Visit: publications.adda247.com & store.adda247.com
 For any information, mail us at publications@adda247.com

Directions (1-5): Study the following information carefully and answer the given questions.

Eight persons i.e. P, Q, R, S, T, U, V and W are sitting around a circular table facing the centre, but not necessarily in the same order.

P sits second to right of U. V, who does not sit near to U and P, sits second to the right of S. Only two people sit between S and Q. R is not an immediate neighbor of V and U. W sits second to left of Q. T is not an immediate neighbour U. T does not sit opposite to W.

Q1. How many persons sit between P and W when counted in anti-clockwise direction from P?

- (a) None
- (b) One
- (c) Two
- (d) Three
- (e) Four

Q2. Who sits exactly between T and W?

- (a) Q
- (b) R
- (c) S
- (d) U
- (e) None of these

Q3. What is the position of W with respect to P?

- (a) Third to the left
- (b) Immediate to the right
- (c) Second to the right
- (d) Third to the right
- (e) Immediate to the left

Q4. How many persons sit between V and P?

- (a) Two
- (b) One
- (c) Five
- (d) Three
- (e) None of these

Q5. Four of the following five are alike in a certain way based on their seating positions in the above arrangement and so from a group. Which is the one that does not belong to that group?

- (a) S-U
- (b) Q-T
- (c) W-R
- (d) T-W
- (e) V-P



LIVE BATCHDuration
35 Days



ULTIMATE

Complete Package


Continuous Live Classes


Live Doubt Sessions

MATHS & REASONING

Hindi & English with E book

Directions (6-8): Study the following information carefully and answer the given questions:

There are six persons namely P, Q, R, S, T and U. They have different number of books. P is father-in-law of R. T is granddaughter of P. Oldest member of the family has maximum books. R has less books than only two persons. R's wife has 2 children. U has only one grandson. S is not male member of the family. U has more books than granddaughter of P and less books than S. Q has more books than only one member.

Q6. How is P related to Q?

- (a) Uncle
- (b) Father
- (c) Mother
- (d) Maternal grand father
- (e) None of these

Q7. How many persons have more books than S?

- (a) One
- (b) Three
- (c) Four
- (d) Five
- (e) None of these

Q8. How many persons have more books than T's father?

- (a) Three
- (b) Two
- (c) Four
- (d) One
- (e) None of these

Directions (9-10): In these questions, relationship between different elements is shown in the statements. The statements are followed by conclusions. Study the conclusions based on the given statements and select the appropriate answer.

Give answer:

Q9.

Statements:

$$P \geq K > M \leq O \leq Z < X$$

Conclusions:

I. $P \geq Z$

II. $M < X$

- (a) If only conclusion II is true
- (b) If only conclusion I is true
- (c) If both conclusion I and II are true
- (d) If either conclusion I or II is true
- (e) If neither conclusion I nor II is true

Q10.

Statements:

$G > I \geq E = A \leq T \leq S; D \leq A \leq B$

Conclusions:

I. $B > G$

II. $B = G$

- (a) If only conclusion II is true
- (b) If only conclusion I is true
- (c) If both conclusion I and II are true
- (d) If either conclusion I or II is true
- (e) If neither conclusion I nor II is true

Directions (11-15): Read the following information carefully and answer the questions given below.

Eight boys J, L, N, P, T, V, X and Z are sitting in two parallel rows facing each other. Each row has five seats and one seat is vacant. Vacant seats in each row are not facing each other. In Row-1 T, V, X and Z are sitting and facing north, while In Row-2 J, L, N and P are sitting and facing south, but not necessary in the same order.

Vacant seat is third to the left of Z. There is one seat between T and X. Vacant seat is second to the right of N. Only one boy sits between P and L, who does not face T. Only one boy sits between T and V. J does not face Z.

Q11. Who among the following faces J?

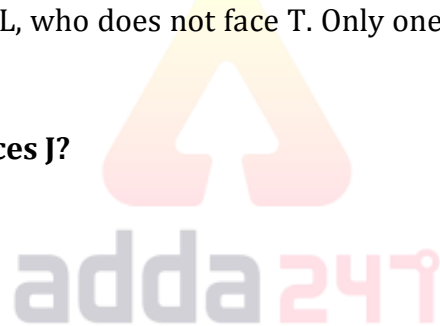
- (a) Z
- (b) T
- (c) Vacant
- (d) X
- (e) V

Q12. Four of the following five belong to a group in a certain way, find which of the one does not belong to the group?

- (a) J
- (b) P
- (c) Z
- (d) T
- (e) N

Q13. How many boys are sitting between T and Z?

- (a) One
- (b) Two
- (c) Three
- (d) None
- (e) None of these



50% OFF

**SBI Clerk
2019**

PRELIMS

WITH VIDEO SOLUTION

35 TOTAL TEST

- 20 Full Length Mocks
- 15 Section wise Practice Sets

Q14. Who among the following boy faces the boy who sits Third to the left of V?

- (a) L
- (b) N
- (c) Vacant
- (d) J
- (e) P

Q15. Who among the following boy faces L?

- (a) Z
- (b) X
- (c) Vacant
- (d) T
- (e) V

Directions (16-20): In each question below are given two/three statements followed by two conclusions numbered I and II. You have to take the given statements to be true even if they seem to be at variance with commonly known facts. Read all the conclusions and then decide which of the given conclusions logically follows from the given statements, disregarding commonly known facts. Give answer-

Q16. Statements:

Some prime are consonant.

All consonant are cups.

No cup is a cap.

Conclusions:

I. Some consonant being cap is a possibility.

II. All cups being prime is a possibility.

- (a) if only conclusion I follows.
- (b) if only conclusion II follows.
- (c) if either conclusion I or II follows.
- (d) if neither conclusion I nor II follows,
- (e) if both conclusions I and II follow.

Q17. Statements:

Some prime are consonant.

All consonant are cups.

No cup is a cap.

Conclusions:

I. No cap is consonant.

II. Some prime are not caps.

- (a) if only conclusion I follows.
- (b) if only conclusion II follows.
- (c) if either conclusion I or II follows.
- (d) if neither conclusion I nor II follows,
- (e) if both conclusions I and II follow.

Q18. Statements:

All number is digits.
No digit is a numeric.

Conclusions:

- I.** Some number is not numeric.
II. No number is a numeric.
(a) if only conclusion I follows.
(b) if only conclusion II follows.
(c) if either conclusion I or II follows.
(d) if neither conclusion I nor II follows,
(e) if both conclusions I and II follow.

Q19. Statements:

No foil is a wrap.
Some wraps are tabs.

Conclusions:

- I.** Some tabs are not foils.
II. All foils being tabs is a possibility.
(a) if only conclusion I follows.
(b) if only conclusion II follows.
(c) if either conclusion I or II follows.
(d) if neither conclusion I nor II follows,
(e) if both conclusions I and II follow.

Q20. Statements:

Some boxes are books.
All books are pencils.

Conclusions:

- I.** All boxes being pencils is a possibility.
II. Some pencils are books
(a) if only conclusion I follows.
(b) if only conclusion II follows.
(c) if either conclusion I or II follows.
(d) if neither conclusion I nor II follows,
(e) if both conclusions I and II follow.

Directions (21-25): Study the following information carefully and answer the questions given below:

Eight girls A, B, C, D, H, I, J and K live in eight different floors in a building, but not necessarily in the same order. Lowermost floor is numbered-1 and the above floor is numbered-2, and so on till the top most floor is numbered 8.

H lives on even numbered floor. H lives immediately below K. More than three girls live between K and B. Only one girl lives between B and C. Three girls live between A and J. J lives above A. C does not live immediate below A and H. D does not live on odd numbered floor. C does not live on fourth floor.

**IBPS RRB 2019
PO PRIME**

70+ TOTAL TESTS

- 30 FULL LENGTH MOCKS
- 6 PREVIOUS YEARS PAPERS
- 35 SECTION WISE SETS

BILINGUAL



Q21. Who among the following lives on 6th floor?

- (a) C
- (b) I
- (c) J
- (d) K
- (e) None of the above

Q22. How many persons live between J and H?


- (a) One
- (b) Three
- (c) Four
- (d) None
- (e) Two

Q23. Four of the five following create a group, find which of the one does not belong to that group?

- (a) B, I
- (b) J, D
- (c) H, K
- (d) C, J
- (e) I, C

Q24. Who among the following lives on the immediate above to K's floor?

- (a) C
- (b) The one who lives on 4th floor
- (c) The one who lives on 3rd floor
- (d) H
- (e) None of the above



Q25. Who among the following lives exactly between C's and B's floor?

- (a) D
- (b) I
- (c) H
- (d) A
- (e) Can't be determined

Directions (26-28): Study the following information carefully and answer the questions given below.

A person starts from point E in east direction and goes 15m to reach point X. Then he moves 22m in north direction to reach point L. Now, he takes right turn and moves 10m to reach point T and after that he takes right turn and moves 11m to reach point O.

Q26. What is the direction of point T with respect to point E?

- (a) North-East
- (b) South-West
- (c) South-East
- (d) North-West
- (e) North

Q27. What is the total distance covered by the person from point E to point T?

- (a) 42m
- (b) 47m
- (c) 40m
- (d) 25m
- (e) None of these

Q28. If Point K is 11m south from Point O, then find the distance between Point E to Point K?

- (a) 22m
- (b) 20m
- (c) 25m
- (d) 57m
- (e) 69m

Directions (29-30): Study the following information carefully and answer the questions given below.

There are 5 members in a family and only one are married couple. X is the only daughter of A. N is father-in-law of V. P is Sister-in-law of X. V is not a female. A is the Father-in-law of P.

Q29. How is V related to X?

- (a) Father
- (b) Mother
- (c) Brother-in-law
- (d) Mother-in-law
- (e) None of these

Q30. Which of the following pair is married couple?

- (a) X, P
- (b) P, V
- (c) V, A
- (d) N, P
- (e) None of these

**LIC AAO MAINS
PRIME 2019
GENERALIST**

45+ TOTAL TESTS

- 10 Full Length Mocks
- 15 Section Wise Sets
- 20 Topic Wise sets
- 2 Previous Years Papers
- eBooks

BILINGUAL

Directions (31-35): Study the following information carefully and answer the questions given below:


Eight persons A, B, C, D, E, F, G and H like different subjects i.e. Math, Physics and Chemistry but not necessarily in the same order. At least two persons like same subject but not more than three. Also, each person married to different woman's i.e. P, Q, R, S, T, U, V and W, but not necessarily in the same order. B and F like same subject but not chemistry. E likes the same subject with only G, who married with S. C likes Physics and married with T. H does not like Math. Also, H is neither married with T nor Q. D does not like the same subject which like by F, who married with P. W and U are the wife of A and B respectively. E is neither the husband of Q nor V. A does not like physics. G does not like Math.

Q31. Which of the following pairs represent the wife of those persons who like Physics?

- (a) UTQ
- (b) VPR
- (c) VQT
- (d) RSW
- (e) QTS

Q32. Who among the following is married with E?

- (a) S
- (b) R
- (c) Q
- (d) W
- (e) P



Q33. Four of the following five are alike in a certain way and so form a group. Which is the one that does not belong to that group?

- (a) A-W
- (b) C-T
- (c) G-S
- (d) H-T
- (e) F-P

Q34. D is related to Physics in the same way as B is related to Math based on the given arrangement. Which of the following is E related to, following the same pattern?

- (a) Physics
- (b) Chemistry
- (c) Math
- (d) Both (a) and (b)
- (e) None of these

Q35. Which of the following combination is true?

- (a) F-Math
- (b) D-Chemistry
- (c) B-Physic
- (d) D-Math
- (e) None of the above

Q36. The simple interest accrued in $5/2$ years on a principal of Rs. 18,000 is $3/20$ th of the principal. What is the rate of simple interest (per annum) ?

- (a) 6%
- (b) 4%
- (c) $5 \frac{1}{2}$ %
- (d) $7 \frac{1}{2}$ %
- (e) 8%

Q37. A shopkeeper mixed X kg tea of one variety cost Rs 260 per kg and (X+8) kg tea of other variety cost Rs 320 per kg and after selling the mixture at Rs 357 per kg, he got a profit of 20%. Find the value of X?

- (a) 8 kg
- (b) 10 kg
- (c) 12 kg
- (d) 15 kg
- (e) 16 kg

Q38. If 40% of P is equal to 75% of Q then find 12P is what percent of 20Q?

- (a) 120%
- (b) 110%
- (c) $107 \frac{1}{2}$ %
- (d) 100%
- (e) $112 \frac{1}{2}$ %

Q39. Downstream speed of a boat is 5 km/hr more than its upstream speed and the speed of boat in still water is 280% more than the speed of stream. Find the total time taken by boat to travel 42 km in downstream and 31.5 km in upstream?

- (a) $7 \frac{1}{2}$ hr
- (b) 8 hr
- (c) 9 hr
- (d) $9 \frac{1}{2}$ hr
- (e) 10 hr



**IBPS RRB
PO/ CLERK 2019**

COMPLETE KIT

Test Series | Books | eBooks

160 + Total Tests
500 + eBooks
4 Printed Edition Books

Q40. Ratio of Ayush's age 1 year later and Veer's age 5 years ago is 1 : 1 and average of their ages 6 years later will be 33 years then find ratio of present age of Veer to Ayush?

- (a) 8 : 7
- (b) 4 : 3
- (c) 3 : 2
- (d) 5 : 4
- (e) 5 : 3

Directions (41-45): What will come in place of (?) in the following questions:

Q41. 85% of ? of 6755 = 3281

- (a) $\frac{4}{7}$
- (b) $\frac{2}{7}$
- (c) $1\frac{1}{7}$
- (d) $\frac{6}{7}$
- (e) $1\frac{3}{7}$

Q42. $\sqrt[3]{?} \times \sqrt[3]{2197} = \sqrt[4]{(8281)^2}$

- (a) 512
- (b) 216
- (c) 125
- (d) 343
- (e) 729

Q43. $\sqrt{9409} - \sqrt{1156} = 3339 \div ?$

- (a) 43
- (b) 63
- (c) 53
- (d) 47
- (e) 57

Q44. $(320\% \text{ of } 825) \div ? = 48$

- (a) 55
- (b) 45
- (c) 65
- (d) 58
- (e) 75

Q45. $\frac{2}{21} \text{ of } 2268 \div 12 + ? = \sqrt{3025}$

- (a) 47
- (b) 37
- (c) 27
- (d) 57
- (e) 45



Directions (46-50): The following table shows total number of candidates who have cleared the SBI Clerk prelims exam 2018 and ratio of male to female among them from five different states of India. Study the table carefully to answer the following questions.

Sates	Number of candidates who cleared pre-exam	Ratio of male to female
Delhi	12,400	1 : 1
UP	16,400	3 : 1
Maharashtra	9,800	4 : 3
Bihar	12,800	5 : 3
Gujrat	6,400	9 : 7

Q46. Find the total number of male candidates who qualified the SBI clerk prelims exam from UP and Maharashtra together.

- (a) 16,400
- (b) 17,900
- (c) 15,900
- (d) 21,400
- (e) 18,600

Q47. Find the difference between total male candidates who cleared SBI Clerk prelims exam from Delhi and Bihar together and female candidates who cleared SBI Clerk prelims exam together from same states together?

- (a) 3600
- (b) 3200
- (c) 2800
- (d) 2400
- (e) 3800

Q48. Total male candidate qualified the SBI clerk prelims exam from Gujrat are what percent of total male candidates qualified the SBI clerk prelims exam from Maharashtra?

- (a) $64\frac{2}{7}\%$
- (b) $54\frac{1}{3}\%$
- (c) $44\frac{2}{3}\%$
- (d) $74\frac{5}{6}\%$
- (e) $66\frac{2}{7}\%$

IBPS RRB 2019

PO + CLERK

PRIME PACKAGE

160+ TOTAL TESTS

- 60 FULL LENGTH MOCKS
- 10+ PREVIOUS YEARS PAPERS
- 70 SECTION WISE SETS
- 20 TOPIC WISE PRACTICE SETS

BILINGUAL

Q49. What is the average number of candidates who cleared SBI Clerk Pre- exam from all states together?

- (a) 9560
- (b) 10450
- (c) 11560
- (d) 12560
- (e) 8650

Q50. Female candidates who qualified SBI clerk prelims exam from UP are what percent more or less than that of female candidates qualified the SBI clerk prelims exam from Bihar?

- (a) $14\frac{7}{12}\%$
- (b) $11\frac{2}{3}\%$
- (c) 16%
- (d) 18%
- (e) 8%

Q51. The ratio of the length and the breadth of a rectangular plot is 6 : 5 and the ratio of numerical value of perimeter and the area of this plot is 2 : 15. Find the perimeter of a square whose numerical value of its area is equal to numerical value of the perimeter of the rectangle?

- (a) 40 cm
- (b) 36 cm
- (c) 44 cm
- (d) 48 cm
- (e) 52 cm

Q52. The cost price of a pencil is Rs 8 less than that of pen. When the pen is sold at 50% profit and pencil is sold at 150% profit it is found that the selling price of both become same. Find the cost price of pen.

- (a) Rs. 20
- (b) Rs. 24
- (c) Rs. 25
- (d) Rs. 16
- (e) Rs. 15

Q53. A alone can complete a work in 36 days. B is $\frac{2}{3}$ rd as efficient as A and if $\frac{7}{9}$ th of the work is done by A and B together then the remaining work is completed by C alone in 24 days. In how many days, all the three will complete the whole work by working together.

- (a) 27 days
- (b) 12 days
- (c) 24 days
- (d) 15 days
- (e) 18 days

Q54. In how many difference ways, the letters of the word 'UBUNTU' can be arranged so that vowels come together?

- (a) $4! \times 3!$
- (b) $\frac{6!}{3!}$
- (c) 24
- (d) $3! \times 3!$
- (e) None of the above

Q55. If $X : Y = 2 : 3$ & $Y : Z = 4 : 5$ and average of X, Y & Z is 105 then find $X+Z-Y$?

- (a) 87
- (b) 90
- (c) 105
- (d) 96
- (e) None of these

Directions (56-61): What will come in the place of question (?) marks in following number series.

Q56. 156, 152, 160, 144, ?, 112

- (a) 196
- (b) 184
- (c) 180
- (d) 176`
- (e) 188

Q57. 4, 2.5, 4, 8.5, 20.5, ?

- (a) 52.75
- (b) 55.75
- (c) 51.75
- (d) 50.75
- (e) 49.75

Q58. 56, 344, 488, ?, 596, 614

- (a) 560
- (b) 520
- (c) 480
- (d) 420
- (e) 510

Q59. 912, 1641, 1298, 1423, ?, 1397

- (a) 1396
- (b) 1390
- (c) 1380
- (d) 1360
- (e) 1456



50% OFF

**SBI Clerk
2019**

PRELIMS

WITH VIDEO SOLUTION

35 TOTAL TEST

- 20 Full Length Mocks
- 15 Section wise Practice Sets

Q60. 145, 156, 143, 158, ?, 160

- (a) 131
- (b) 141
- (c) 144
- (d) 148
- (e) 156

Q61. 84, ?, 98, 490, 122.5 367.5

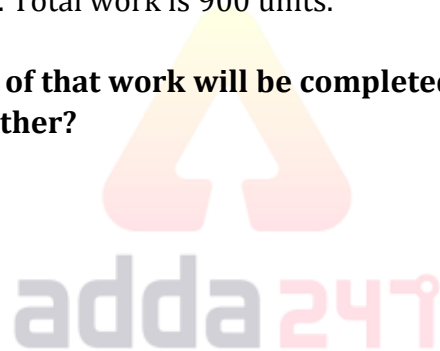
- (a) 588
- (b) 556
- (c) 550
- (d) 540
- (e) 536

Directions (62-66): Study the passage given below and answer the following questions.

There are 5 persons – A, B, C, D & E. E is 200% more efficient than A and A's efficiency is 40% of B's efficiency. A alone can complete a piece of work in 45 days and D alone can do same piece of work in 30 days. C is 50% more efficient than D. Total work is 900 units.

Q62. Find in how many days 90% of that work will be completed by A & B (B working with 80% of his usual efficiency) working together?

- (a) 25.5 days
- (b) 21.5 days
- (c) 18.5 days
- (d) 13.5 days
- (e) 20.5 days



Q63. Find difference between units of work done by C alone & E alone in 12 days, if C is working with 60% of its usual efficiency and E is working with 65% of its usual efficiency.

- (a) 114 units
- (b) 144 units
- (c) 194 units
- (d) 164 units
- (e) 134 units

Q64. Find in how days the whole work will be completed by B, C and D, if they start working together.

- (a) $10\frac{1}{5}$ days
- (b) $8\frac{3}{5}$ days
- (c) $11\frac{4}{5}$ days
- (d) $7\frac{1}{5}$ days
- (e) 9 days

Q65. If A, C and E starts working alternatively such that E will be working on first day, followed by A and C respectively, then find in how many days 70% of the total will be completed?

- (a) $24\frac{4}{5}$ days
- (b) $17\frac{3}{5}$ days
- (c) $21\frac{1}{2}$ days
- (d) $12\frac{3}{4}$ days
- (e) $15\frac{1}{12}$ days

Q66. Work completed by D alone in 14 days is what percent of the work completed by B alone in 8 days?

- (a) 130%
- (b) 105%
- (c) 160%
- (d) 155%
- (e) 185%

Directions (67-70): What will come in place of (?) in the following questions?

Q67. $18 \times 20 + (7)^2 + 8\% \text{ of } 400 = (?)^2$

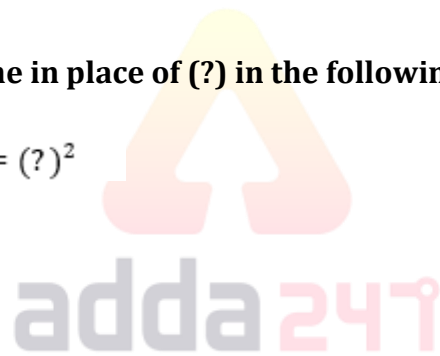
- (a) 31
- (b) 21
- (c) 51
- (d) 11
- (e) 41

Q68. $2719 + \sqrt{1369} - 1971 = 5 \times ?$

- (a) 157
- (b) 202
- (c) 178
- (d) 143
- (e) 189

Q69. $(12)^2 \times 6 \text{ of } 20\% \text{ of } 740 \div 16 = ? \times 999$

- (a) 9
- (b) 11
- (c) 12
- (d) 8
- (e) 10



Q70. 62% of 1600 – (24)² = ? × 8

- (a) 44
- (b) 52
- (c) 66
- (d) 58
- (e) 50

Directions (71-80): Read the following passage carefully and answer the questions given below it. Certain words are given in bold to help you locate them while answering some of the questions.

India must remain within the Regional Comprehensive Economic Partnership (RCEP), a group of 16 nations negotiating a trade agreement. Indian industry is **wary** of the potentially adverse impact of preferential Chinese imports. But this is the only chance of securing a rules-based framework with China. The multilateral trading system—most **conducive** to the interests of a developing country—is likely to remain comatose. This is compelling trading nations to resort to regional trade agreements to expand their markets. The Comprehensive and Progressive Trans-Pacific Partnership (CPTPP) will become effective, sans the US, after the requisite ratifications. Thus, between these two agreements, 26 trading nations would have implemented preferential arrangements, potentially at the cost of India. India's exports have been stagnating for some years now. It has not concluded a significant trade agreement in a decade.

The ongoing trade war has already created **turbulence** and uncertainty in global markets. This is bound to affect the nature and direction of global trade flows. Modern production networks stretch across manufacturing economies and trade agreements are important institutional mechanisms to facilitate countries' access to such value chains. India must look for opportunities to hook into them. The India-China economic relationship should be seasoned with realism in these turbulent times, when geopolitics is transitioning. India must, therefore, establish a more in-depth understanding with its neighbor on economic issues as they unfold over the next decade or so. China's average industrial tariff is 8.5%—by no means low. The preferential tariff framework can give India better access to the Chinese market. Further, the opaque and discriminatory regulatory framework in China needs to be addressed for which a plurilateral framework, where several others have similar concerns, is better than a bilateral framework. India's reform agenda pervades all spheres of the economy. Positive developments have been reported in trade facilitation, ease of doing business, helped along by systemic reforms such as the goods and services tax, strengthening and expansion of infrastructure and greater focus on technology facilitation. Today, only globally competitive industries can survive. Reliance on government largesse is neither possible nor desirable from a sustainability perspective. Therefore, a shakeout and repositioning is **imminent**. Having been threatened by US unilateralism, China should be more amenable to calls of cooperation and understand India's predicament. India also has leverage in the form of its potential market size. It must, therefore, negotiate with greater confidence and craftsmanship and not be swayed by the threats of its partners. India's exclusion from RCEP will cost others heavily. The stage for negotiations at the diplomatic level seems to have passed. Some critical parts of such deals can only be concluded at the highest political levels. Some straight-talking with the major proponents is overdue.

Most frontline trading nations now negotiate deeper trade agreements, which involve multiple layers of trade engagement such as non-tariff ecosystems, regulatory frameworks and even some so-called non-trade issues. Most of our agreements are shallow and relatively less **rigorous** on non-tariff issues. It must be underlined that these negotiations are not simple. Most of the time, India's approach to trade negotiations has been typified by a defensive stance. This is because of the huge diversity in our economic and industrial architecture and consequent complexity in our positions. While some sectors continue to seek government support to cover their inefficiencies, some potential winners will need support. India can ask for a long-term tiered approach to tariff reduction/elimination. It can seek front-loading of concessions from a trading partner like China. It can specifically pick those tariff lines where it has greater interest to integrate into regional value chains in the list of front-loaded items. India should negotiate annexes to the main agreement on sectoral regulatory frameworks and processes/protocols. The idea is to not only agree on concession schedules but to also freeze processes and regulatory rules for assured transparency. Last but not least, industry must create a B-team of sectoral experts to support government negotiators. If negotiated well, the RCEP has the potential to be a game-changer for India.

Q71. How is the ongoing trade war between the U.S. and China going to impact the global markets?

- (a) Negotiations at the diplomatic level.
- (b) Creation of upheaval and uncertainty in global markets.
- (c) The nature and direction of trade flows is going to get affected.
- (d) Both (b) and (c).
- (e) Both (a) and (b).

Q72. Across which institutional mechanism is modern productions stretch necessary to facilitate India's access to some value chains?

- (a) Investment guarantees
- (b) Chemical weapons convention deal
- (c) Manufacturing economies and trade agreements.
- (d) Framework Convention on Climate change
- (e) China India Directive on the legal protection of biotechnological inventions.

Q73. What are the spheres of the economy described in the passage in which India's reform agenda has infused?

- (a) Goods and Services Tax.
- (b) Strengthening and expansion of infrastructure.
- (c) Trade facilitation along with technology facilitation.
- (d) Ease of doing business.
- (e) All of these.

Q74. How should India take advantage of its potential market while negotiating a trade agreement, for example RCEP?

- (a) Not get swayed by the threat of its partners.
- (b) Negotiate with greater confidence and craftsmanship.
- (c) Being less rigorous on non-tariff issues.
- (d) Both (a) and (b)
- (e) Both (b) and (c)

**LIC AAO MAINS
PRIME 2019
GENERALIST**

45+ TOTAL TESTS

- 10 Full Length Mocks
- 15 Section Wise Sets
- 20 Topic Wise sets
- 2 Previous Years Papers
- eBooks

BILINGUAL

Q75. Which of the statements is false according to the passage?

- (a) China's average industrial tariff, which is 8.5%, is not low.
- (b) India must not look to hook into opportunities of manufacturing economies and trade agreements.
- (c) India's approach to trade negotiations has been typified by a defensive stance
- (d) India's exclusion from RCEP will not have significant effects on other countries.
- (e) India has leverage in the form of its potential market size.

Directions (76-78): Certain words have been given in BOLD in the passage. Find the word or the pair of words from the given options which is the synonym of the given bold word.

Q76. Wary

- (a) Prudent
- (b) Naive
- (c) Gullible
- (d) Inadvertent
- (e) Indiscreet

Q77. Conducive

- (a) Baneful
- (b) Adverse
- (c) Contributory
- (d) Hindering
- (e) Unfavorable

Q78. Turbulence

- (a) Turmoil
- (b) Composure
- (c) Serenity
- (d) Tranquility
- (e) Calmness



Directions (79-80): Certain words have been given in bold in the passage. Find the word or the pair of words from the given options which is the ANTONYM of the given bold word.

Q79. Imminent

- (a) Impending
- (b) Forthcoming
- (c) Distant
- (d) Looming
- (e) Menacing

Q80. Rigorous

- (a) Stringent
- (b) Lenient
- (c) Meticulous
- (d) Rigid
- (e) Austere

Directions (81-85): In the following questions, a sentence is divided into five parts with one of the parts of each sentence is highlighted in bold suggesting the grammatically correct part of the sentence. Out of the four other parts, choose the part of the sentence which contains grammatical or contextual error in it. If the given sentence is both grammatically correct and contextually meaningful, choose option (E) i.e., “No error” as your answer.

Q81. I love that really (A) / green old big antique car (B) / that is always (C) / parked at the end (D) / of the street. (E)

- (a) green old big antique car
- (b) that always
- (c) parked at the end
- (d) of the street
- (e) No error

Q82. On his right wrist (A) / **he wore the silver bracelet (B)** / set with lapis stones, (C) / and on each and every of his (D) / little fingers, the gold rings. (E)

- (a) On his right wrist
- (b) set with lapis stones,
- (c) and on each and every of his
- (d) little fingers, the gold rings
- (e) No error

Q83. The book had been (A) / condemned by certain authority (B) / connected with the (C) / Council, but had (D) / **not been condemned conciliary. (E)**

- (a) The book had been
- (b) condemned by certain authority
- (c) connected with the
- (d) Council, but had
- (e) No error

Q84. The natural heritage (A) / can boast the most unique (B) / combination of a (C) / tropical climate, vast archipelago (D) / **and long stretch of beaches. (E)**

- (a) The natural heritage
- (b) can boast the most unique
- (c) combination of a
- (d) tropical climate, vast archipelago
- (e) No error

Q85. When the man made (A) / an earnest offer to pay (B) / **for the groceries (C)** /I could not afford, he overwhelmed me (D) / with his kindness. (E)

- (a) When the man made
- (b) an earnest offer to pay
- (c) I could not afford, he overwhelmed me
- (d) with his kindness
- (e) No error

IBPS RRB 2019
PO + CLERK
PRIME PACKAGE
160+ TOTAL TESTS

- 60 FULL LENGTH MOCKS
- 10+ PREVIOUS YEARS PAPERS
- 70 SECTION WISE SETS
- 20 TOPIC WISE PRACTICE SETS

BILINGUAL

Directions (86-90): Each question below has one blank, which is indicating that something has been omitted. Find out which option can be used to fill up the blank in the sentence to make it meaningfully complete.

Q86. Religious commitments go much _____ than intellectual explanations.

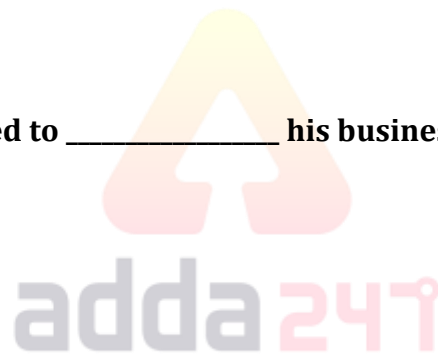
- (a) Converged
- (b) Climatic
- (c) Deeper
- (d) Managerial
- (e) Preclude

Q87. Modern science and technology _____ human beings to control natural forces more effectively.

- (a) Populates
- (b) Empower
- (c) Interprets
- (d) Adjourns
- (e) Reschedule

Q88. The customer also threatened to _____ his business relationship with the employer.

- (a) Aspect
- (b) Ponder
- (c) Terminate
- (d) Appease
- (e) Increase



Q89. For college students to do a part-time job will exert a _____ influence on their personality and life.

- (a) Disfigure
- (b) Yearning
- (c) Blameless
- (d) Profound
- (e) Aloof

Q90. The reduction in white blood cell counts lowers the _____ to disease.

- (a) Reaction
- (b) Acceptance
- (c) Resistance
- (d) Magnificence
- (e) Reliability

Directions (91-95): Which of the phrases (A), (B), (C) and (D) given below should replace the phrase given in bold in the following sentences to make the sentence grammatically correct? If the sentence is correct as it is and there is no correction required mark (E) i.e. 'No correction required' as the answer.

Q91. There is no one **who I esteem more** than your father.

- (a) That I esteem more
- (b) Whom I esteem very
- (c) Whom I esteem more
- (d) Which I esteem very
- (e) No correction required

Q92. The use of animals in scientific tests **raise some difficult** ethical questions.

- (a) did raised some difficult
- (b) raises some difficult
- (c) rises some difficult
- (d) being raised some
- (e) No correction required

Q93. More ammonium sulphate solution is **being recovered with through** the process of distilling oil shale.

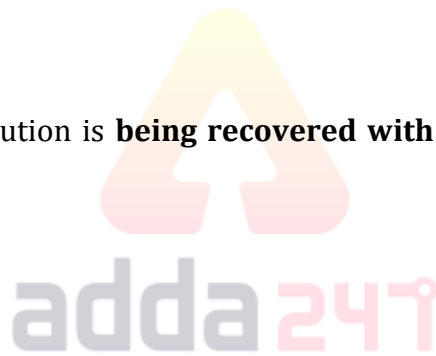
- (a) Recovering on
- (b) Having recovered from
- (c) Having been recovered from
- (d) Being recovered in
- (e) No correction required

Q94. **There was too many** people trying to get into the football stadium.

- (a) There was too much
- (b) There were too many people
- (c) There were too much
- (d) It was too many
- (e) No correction required

Q95. You could have **lend me few rupees** in that hour of need?

- (a) Borrow me many rupees
- (b) Lend me any rupees
- (c) Lent me a few rupees
- (d) Bought me few rupees
- (e) No correction required



**IBPS RRB 2019
PO PRIME**

70+ TOTAL TESTS

- 30 FULL LENGTH MOCKS
- 6 PREVIOUS YEARS PAPERS
- 35 SECTION WISE SETS

BILINGUAL

Directions (96-100): In the following passage, some of the words have been left out, each of which is indicated by a number. Find the suitable word from the options given against each number and fill up the blanks with appropriate words to make the paragraph meaningfully complete.

The irony of our age is that we're working towards machines becoming human, and humans becoming machines. Technology doesn't have the answer to everything health-related. This is an intoxicating viewpoint that several industry giants hold. But our lives are a _____(96) _____ between mind, body and spirit. Technology can never replace self-knowledge and self-intimacy, a lack of which is the very root of chronic physical illness as well as emotional trauma. Ancient intelligence of your ancestors is still stored in your DNA, and you carry a _____(97) _____ piece of the cosmos within you. It becomes dangerous when metrics and technological identities are _____(98) _____ on you. We were never made to fit into external moulds, and we are too beautifully complex to live in technical strait jackets. Throughout history, humans have had the experience of knowing more than what's _____(99) _____ by their five senses – an implicit knowledge, energy sensitivities, intuition – and the more they open to these concepts, the more strongly they feel this enigmatic force. We have been losing touch with the _____(100) _____ information that mind-body-spirit is constantly trying to convey, and this wreaks havoc in our lives. We are divinely human – we have knowledge, wisdom and power stored inside our personhood – which technology cannot replace. Our bodies never lie. Desire, ambition, art, creativity, gut instincts, love, empathy, ability to create beauty, to rise from the ashes of our losses – are just some of the tools in our arsenal which are unmatched.

Q96.

- (a) Purchase
- (b) Negotiation
- (c) Scolding
- (d) Dishonest
- (e) Resolving

Q97.

- (a) Tedious
- (b) Abandoning
- (c) Vital
- (d) Contentious
- (e) Swift

Q98.

- (a) Embarrassed
- (b) Located
- (c) Collided
- (d) Annoyed
- (e) Imposed



Q99.

- (a) Perceived
- (b) Consoled
- (c) Surrendered
- (d) Extreme
- (e) Insisted

Q100.

- (a) Unkind
- (b) Humble
- (c) Crucial
- (d) Ruined
- (e) Civilized

LIVE BATCHDuration
35 Days



ULTIMATE

Complete Package


Continuous Live Classes


Live Doubt Sessions

MATHS & REASONING

Hindi & English with E book

